

# Archimedean Pre-K

## 27 ΑΠΡΙΛΙΟΥ ΕΩΣ 1 ΜΑΪΟΥ 2026

ΟΝΟΜΑ: \_\_\_\_\_



Αυτή την εβδομάδα μαθαίνουμε....

\*Language:

Listening/Talking, Reading and Writing.

Review: Letters and Vocabulary

\*Mathematics:

Review: Counting, comparing quantities, ordering numbers, composing and decomposing numbers, addition, subtraction.

Αα Ββ Γγ Δδ Εε Ζζ

Ηη Θθ Ιι Κκ Λλ Μμ

Νν Ξξ Οο Ππ Ρρ Σσ

Ττ Υυ Φφ Χχ Ψψ Ωω

Πηγές ( Resources)

\*The Homework Guides



**Εργασία στο σπίτι**



**ΔΕΥΤΕΡΑ**

Section 1 & 2  
REVIEW THE  
LETTERS AND  
VOCABULARY  
(FLASH  
CARDS)  
REVIEW THE  
STORIES AND  
VOCABULARY

**ΤΡΙΤΗ**

REVIEW  
Section 1 & 2

Section 3: 1, 2

**ΤΕΤΑΡΤΗ**

REVIEW:  
STEP BY STEP  
MATH

Section 3: 3, 4

**ΠΕΜΠΤΗ**

REVIEW:  
STEP BY STEP  
MATH

Section 3: 5,  
6, 7

**ΠΑΡΑΣΚΕΥΗ**

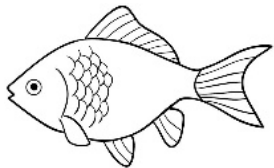
REVIEW:  
STEP BY STEP  
MATH

HOMEWORK 26. Section 3. Activities. Activities should be turned in on Friday.

**ΟΝΟΜΑ:** .....

(ΟΝΟΜΑ) NAME


**1. 1. ΤΙ ΕΙΝΑΙ ΑΥΤΟ; ΓΡΑΨΕ ΤΙΣ ΛΕΞΕΙΣ. WHAT IS THIS? WRITE THE WORDS.**




.....



.....



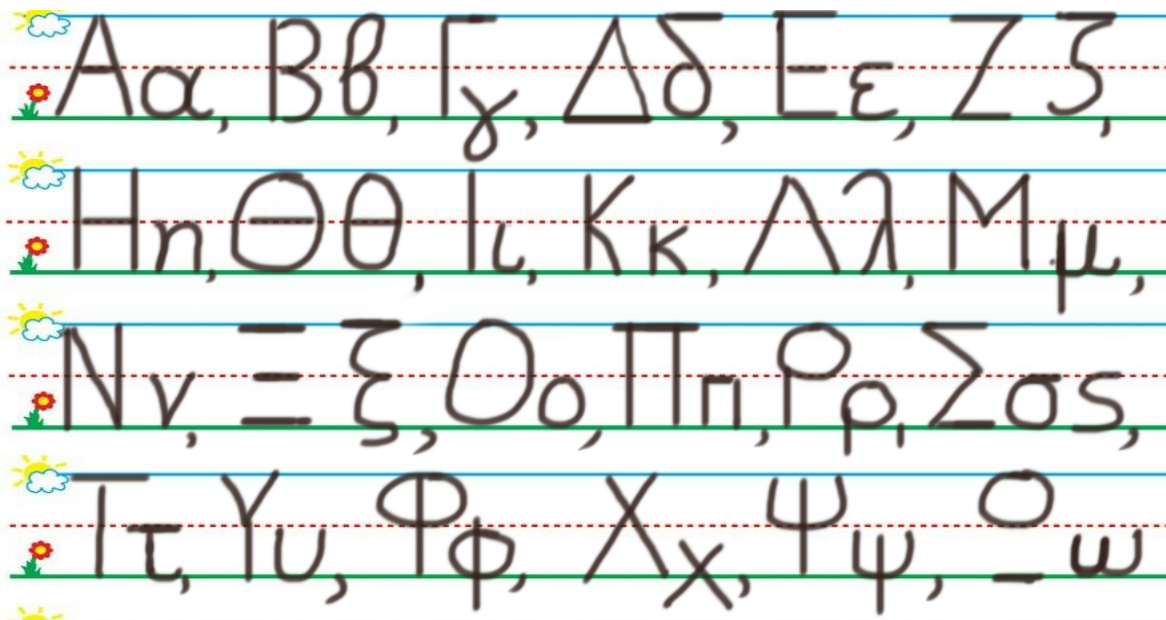
.....



.....


**1. 2. ΚΥΚΛΩΣΕ ΚΑΙ ΠΕΣ ΤΑ ΓΡΑΜΜΑΤΑ ΠΟΥ ΒΡΙΣΚΟΝΤΑΙ ΣΤΗ ΛΕΞΗ : 'ΑΕΡΑΣ'**

**CIRCLE AND SAY THE LETTERS OF THE WORD: "ΑΕΡΑΣ"**



2. ΑΚΟΥ - ΔΙΑΒΑΣΕ - ΖΩΓΡΑΦΙΣΕ: LISTEN TO- READ - DRAW:

**Να το δάσος. Να ο λαγός. Να η χελώνα.**



3. ΒΑΛΕ ΤΟ ΣΩΣΤΟ ΣΥΜΒΟΛΟ ΚΑΙ ΔΙΑΒΑΣΕ. (**>**, **<**, **=**) (VALE TO SOSTO SYMBOLO KE THIAVASE) .PUT THE CORRECT SYMBOL AND READ. ( >,<= )

2 -----5

17-----7

10-----10


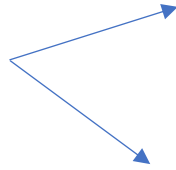

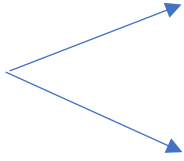
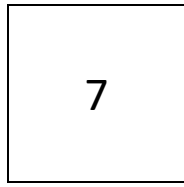
4. ΓΡΑΨΕ ΤΟΝ ΑΡΙΘΜΟ ΠΟΥ ΕΙΝΑΙ ΠΡΙΝ ΚΑΙ ΜΕΤΑ. WRITE THE NUMBER THAT COMES BEFORE AND AFTER.

....., **2**, .....

....., **4**, .....

....., **5**, .....

5. ΓΡΑΨΕ ΤΟΝ ΑΡΙΘΜΟ ΠΟΥ ΛΕΙΠΕΙ ΜΕΣΑ ΣΤΟ ΚΟΥΤΙ (YRAPSE TON ARITHMO POU LIPI MESA STO KOUTI .) WRITE THE MISSING NUMBER IN THE BOX



**6. ΚΑΝΕ ΤΙΣ ΠΡΟΣΘΕΣΕΙΣ. DO THE ADDITIONS.**

$10 + 4 = \dots\dots$

$10 + 2 = \dots\dots$

$10 + 1 = \dots\dots$

$10 + 10 = \dots\dots$

$20 + 10 = \dots\dots$

$5 + 1 = \dots\dots$

$7 + 1 = \dots\dots$

$9 + 1 = \dots\dots$

**7. ΚΑΝΕ ΤΙΣ ΑΦΑΙΡΕΣΕΙΣ. DO THE SUBTRACTIONS.**

$2 - 1 = \dots\dots$

$3 - 1 = \dots\dots$

$4 - 1 = \dots\dots$

$5 - 1 = \dots\dots$

$5 - 5 = \dots\dots$

$4 - 2 = \dots\dots$

$4 - 1 = \dots\dots$

$5 - 3 = \dots\dots$