



Homework Log



Week of: April 13-17

Day	Homework	Reminders
Monday 4/10	Simple addition	
Tuesday 4/11	Simple subtraction	
Wednesday 4/12	Number words	
Thursday 4/13	Gone Bananas for subtraction	
Friday 4/14		


Simple Addition +1

Name: _____

1.) $1 + 1 = \underline{\quad}$




5.) $5 + 1 = \underline{\quad}$



2.) $2 + 1 = \underline{\quad}$




6.) $6 + 1 = \underline{\quad}$



3.) $3 + 1 = \underline{\quad}$




7.) $7 + 1 = \underline{\quad}$




4.) $4 + 1 = \underline{\quad}$



8.) $8 + 1 = \underline{\quad}$





Name _____




$$5 - 1 = \underline{\quad}$$




$$3 - 3 = \underline{\quad}$$




$$10 - 2 = \underline{\quad}$$



$$7 - 4 = \underline{\quad}$$



$$3 - 2 = \underline{\quad}$$



$$8 - 5 = \underline{\quad}$$




$$6 - 3 = \underline{\quad}$$



$$2 - 1 = \underline{\quad}$$




$$4 - 1 = \underline{\quad}$$



$$9 - 2 = \underline{\quad}$$


Name: _____


Number Words

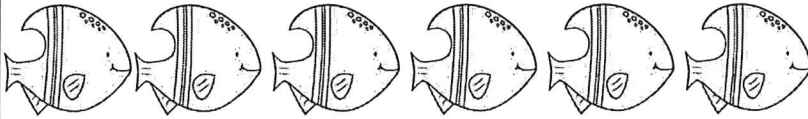


three	six	four	two
seven	five	nine	eight


Count the fish in each row and write the number word beside them.





























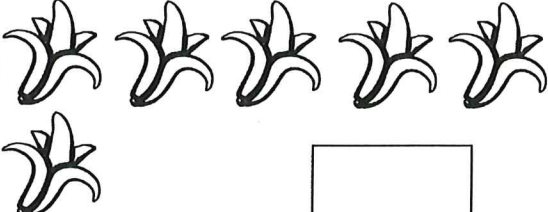
©Tweet Resources

cross out/put an X on the banana you are subtracting/taking away.

Gone Bananas for Subtraction



Name: _____

  $6-1=$ <input type="text"/>	  $7-1=$ <input type="text"/>
 $8-1=$ <input type="text"/>	 $5-1=$ <input type="text"/>
 $4-1=$ <input type="text"/>	 $8-1=$ <input type="text"/>
 $3-1=$ <input type="text"/>	 $6-1=$ <input type="text"/>