

Name: _____

Section: _____

First Grade American Math Homework #25




This week in class, we will complete **Chapter 9: Money**. Students will practice saving and spending money. Scholars will additionally be introduced into telling time to the hour and time to the half hour. Scholars will have a **test on March 18th** on money. Be sure to review online resources.

Scholars have access to the IXL math platform for additional practice and reinforcement of the daily lesson. There is no limit to how many times scholars can review the lessons. Below, please find practice modules scholars can complete from home to develop a deeper understanding of the daily lesson.

- | | | | | | | |
|------|------|------|-------|------|------|------|
| HH.1 | HH.4 | HH.7 | HH.10 | FF.1 | FF.4 | FF.7 |
| HH.2 | HH.5 | HH.8 | HH.11 | FF.2 | FF.5 | |
| HH.3 | HH.6 | HH.9 | HH.12 | FF.3 | FF.6 | |

- | | | |
|--------------------|---------------------|-----------------|
| 1. Cent | 8. Five-dollar bill | 15. Minute hand |
| 2. Penny | 9. Ten-dollar bill | 16. Hour |
| 3. Nickle | 10. Save | 17. Minute |
| 4. Dime | 11. Spend | 18. Half hour |
| 5. Quarter | 12. Analog clock | 19. Half past |
| 6. Dollar | 13. Digital clock | 20. o'clock |
| 7. One-dollar bill | 14. Hour hand | |

Vocabulary



Notes

Students **MUST** prove and show all their work. If additional space is needed, please feel free to attach lined paper to the homework packet. **Failure to show your work will result in a lower grade.** Please complete the homework to the best of your abilities.

Monday March 16th – Page 429 and 430

Tuesday March 17th – Page 431 and 432

Wednesday March 18th – No Homework


Thursday March 19th – Page 635

Friday March 20th – Page 641


Name _____

Chapter Review

1. Count. Write the total value.



2. Which coin has a value of 10¢?



3. Jorma has 2 dimes. Which group of coins has the same value?



4. Mr. Agu has \$27. He spends \$9 to buy a book.
How much money does Mr. Agu have left?
-

5. Bindi has 8 nickels. Which shows the same amount in a different way?



6. Which coin has a value of 25 cents?



Name _____

7. Count by tens, fives, or ones. Write the total value.



\$ _____


\$ _____


\$ _____

\$ _____

\$ _____

8. Tina saves 12¢ every week for 4 weeks.
How much money does Tina save?

9. Reya wants to buy a . Which set of bills can she use?



10. Kat uses these coins to buy a sticker.
What is the total value of the coins?



11. Evzen puts 1 quarter, 3 dimes, and 1 nickel in the sharing jar. What is the total value of these coins?

- 60¢ 45¢ 65¢

12. Count. Write the total value.



Name _____

Time to the Hour

Look at where the hour hand points.
Write the time.


Go Online

Interactive Examples


1.



2.



3.



Problem Solving

Solve.


4. Which time is **not** the same? Circle it.




7:00

7 o'clock



5.  Draw a clock to show where the hour hand points at 11:00.



Name _____

Time to the Half Hour

Go Online

Interactive Examples

Look at where the hour hand points.
Write the time.

1.



2.



3.




Problem Solving



Solve.


4. Rocco rides his bike at half past 4:00. He eats dinner at half past 6:00. He reads a book at half past 8:00.



Look at the clock.

Write what Rocco does.

Rocco _____

5.  Draw clocks to show where the hour hand points for 5:00 and half past 5:00.