

Name: \_\_\_\_\_

Dear Students and Parents,

## Data!!!


This week's homework seeks to develop a foundation for statistical thinking, as well as provide a context to support the development of counting skills. During the next few days, our math class will be identifying and sorting objects.

Parents, please download, print and staple this packet. Students should do one page of this packet each evening. It should take them 5 days to complete the packet. They should use the boxes below to check off each day they do the homework. When the packet is complete, they should put it in their green folder and take it to school on Monday

March 19, 2026

Additionally, 20 minutes on Freckle is required each week. Please check green folders for Freckle.com login cards.

Warmly,  
Kadisha Mills, Ph.D.



Name: \_\_\_\_\_ Class: \_\_\_\_\_

Use the boxes below to check off each day the homework is completed.

	Monday	Tuesday	Wednesday	Thursday	Friday
PACKET					
FRECKLE					

Name: \_\_\_\_\_

LESSON 20.1  
Practice and Homework

Name \_\_\_\_\_

### Sort by Shape and Size

Go Online

Interactive Examples



4 sides


less than 4 sides

© Houghton Mifflin Harcourt Publishing Company

**DIRECTIONS** 1. Use shapes like those shown at the top of the page. Sort the shapes into a set of shapes with 4 sides and a set of shapes with less than 4 sides. Draw the shapes to show how you sorted them.

## Lesson Check

2



## Spiral Review

3



4



**DIRECTIONS** 2. Choose the correct answer. Which shape belongs in the set? 3. Circle the object that holds more. 4. Circle the short object.

**790** Florida's B.E.S.T. Go Math! Grade K

Name: \_\_\_\_\_

Name \_\_\_\_\_

## Sort into Three or More Groups

LESSON 20.2  
Practice and Homework

Go Online

Interactive Examples




0 sides	3 sides	4 sides

© Houghton Mifflin Harcourt Publishing Company

**DIRECTIONS** 1. Sort the shapes at the top of the page by their number of sides. Draw the shapes to show how you sorted them.

## Lesson Check

2



## Spiral Review

3



4



**DIRECTIONS** Choose the correct answer. Look at how the shapes are sorted.  
2. Which shape belongs in the middle set? 3. Circle the longer pencil. 4. Circle the object that is small and heavy.







Name: \_\_\_\_\_

Name \_\_\_\_\_

## Sort and Count

LESSON 20.3  
Practice and Homework



Go Online  
Interactive Examples

	big	small
		
		

1

_____	+	_____	_____
-----	+	-----	-----
_____		_____	_____
big		small	all

2

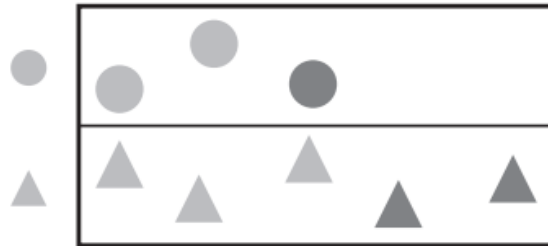
_____	+	_____	_____
-----	+	-----	-----
_____		_____	_____
			all

© Houghton Mifflin Harcourt Publishing Company

**DIRECTIONS** Explain how the shapes are sorted. 1. How many big and small shapes are shown? Write and trace to complete the addition sentence. 2. How many rectangles and triangles are shown? Write and trace to complete the addition sentence.

### Lesson Check

3



1



3



5

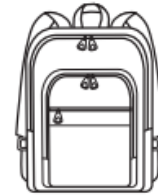
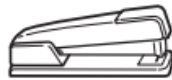


8



### Spiral Review

4



5

17, 19, 20, 18

18, 19, 17, 20

17, 18, 19, 20

20, 19, 17, 18

**DIRECTIONS** 3. Look at the shapes on the sorting mat. Which number shows how many circles and triangles there are in all? Mark under your answer. 4. Which object weighs less than the marker? Mark under your answer. 5. Which set of numbers is in order? Mark beside your answer.