

Name: _____

Section: _____

First Grade American Math Homework #23




This week in class, we will continue learning **Chapter 14: Measurement**. We will work on ordering objects by length. In addition, we will be working with addition and subtraction word problems.

Scholars have access to the IXL math platform for additional practice and reinforcement of the daily lesson. There is no limit to how many times scholars can review the lessons. Below, please find practice modules scholars can complete from home to develop a deeper understanding of the daily lesson. As a reminder, our IXL challenge will end on February 26th! IXL is a great platform in order to reinforce what is reviewed in class.

- | | | | | |
|------|-------|------|-----|------|
| EE.1 | EE.8 | U.2. | W.5 | X.7 |
| EE.2 | EE.9 | U.3 | W.6 | X.10 |
| EE.3 | EE.10 | W.1 | X.1 | X.11 |
| EE.4 | EE.11 | W.2 | X.2 | X.12 |
| EE.8 | EE.13 | W.3 | X.3 | |
| EE.9 | U.1 | W.4 | X.5 | |

- | | | |
|----------------|------------------|--------------------|
| 1. Ruler | 7. Length | 13. Total |
| 2. Inches | 8. Width | 14. And |
| 3. Centimeters | 9. Height | 15. How many more |
| 4. Estimate | 10. Measure | 16. How many fewer |
| 5. Short | 11. All together | 17. Taken away |
| 6. Long | 12. In all | 18. Difference |

Vocabulary



Notes

Students **MUST** prove and show all their work. If additional space is needed, please feel free to attach lined paper to the homework packet. **Failure to show your work will result in a lower grade.** Please complete the homework to the best of your abilities.

Monday February 23rd – Page 623

Tuesday February 24th – Spring Word Problems

Wednesday February 25th – Pictograph Word Problems

Thursday February 26th – Word Problems Worksheet

Friday February 27th – No Homework

Order Length

Go Online

Interactive Examples

Draw three markers in order from longest to shortest.

1. longest

2.


3. shortest

Problem Solving

Solve.


4. Fred has the shortest toothbrush in the bathroom. Circle Fred's toothbrush.



5.  Draw three different lines in order from shortest to longest. Label the shortest line and the longest line.

Name _____

Word Problems



1. Bill had 18 eggs to hide. He hid 6 eggs in the grass and 5 eggs on the playground. How many eggs does he have left to hide?

2. Maria decorated 4 eggs, Carly decorated 8 eggs, and Mark decorated 3 eggs. How many eggs did they decorate altogether?

3. Ashley found 19 eggs. She gave 3 to Nick and 7 to Pat. How many eggs does Ashley have left?

4. Linda dyed 20 eggs. She needs a total of 32 dyed eggs. How many more eggs does she need to dye?





5. Justin invited 35 people to an egg hunt. 12 people did not come. How many people went to the egg hunt?

6. Vanessa found 8 blue eggs, 5 yellow eggs, and 7 pink eggs in her backyard. How many eggs did she find in all?

Name _____ Date _____

Problem Solving - Pictograph

Read and **Solve**. Underline key words.

Number of strawberries with each student	
Margaret	
Susan	
Maria	
Dorothy	

Key:  represents 1 strawberries

- | | |
|---|--|
| 1. How many strawberries does Dorothy have? | |
| 2. How many strawberries does Maria have? | |
| 3. Who has the fewest strawberries? | |
| 4. How many more strawberries does Dorothy have than Susan? | |
| 5. How many strawberries do Maria and Margaret have together? | |
| 6. How many strawberries do the students have in all? | |

Problem Solving

Read and **underline the key word**.

Write an equation to solve.

- | | |
|---|--|
| 1. Frank and his brother each have 12 candybars. How many candybars to they have together? | 2. Jon has 2 dogs. He gives each dog 8 bones. How many bones did the dogs get in all? |
| 3. Sally baked 19 cookies. She gave 8 to her friends. How many cookies does she have left? | 4. Dan has 3 blue pencils, 9 green pencils and 5 yellow pencils. What is the sum of his pencils? |
| 5. Sam has 12 oranges in a bag. He used 3 to make orange juice. How many oranges remained? | 6. Joe bought 4 white roses and 13 red roses. How many more red roses did he buy than white? |
| 7. Riya has 16 necklaces and 9 bracelets. How many fewer bracelets are there than necklaces? | 8. Tim weighs 68 pounds and Jon weight 44 pounds. How much heavier is Tim than Jon? |
| 9. Lily has 19 Barbie dolls. Her family gave her 7 more dolls for Christmas. How many Barbie dolls does she have now? | 10. There were 12 girls at the table for lunch. None went to the bookstore. How many girls were left at the table? |