



2nd Grade

American Math Homework Week 02/16 - 02/20

### HMH Chapter 13 Vocabulary Words

- estimate
- length
- compare
- width
- length
- longer, longest
- shorter, shortest
- inch, foot, and yard
- ruler
- yardstick
- measuring tape
- tile

### A Note From Ms. Varela

We will complete Chapter 13, Measurement, customary Units. Students will be able to estimate and measure the length of an object to the nearest inch, foot, yard, centimeter or meter by selecting and using an appropriate tool. **Chapter 13 Test, Wednesday, Feb. 18th.**

On Thursday, we will begin Chapter 14, Measurement, metric Units. Additional **Vocabulary Words from Chapter 14.**

- centimeter
- meter

**Chapter 14 Test, Thursday, Feb. 26th.**

### Homework

**The homework is due Monday, February 23rd.**

IXL homework may be completed in an iPad or desktop. The IXL login credentials are stapled in the American Math green folder.

Monday	No School
Tuesday	<b>IXL GKJ</b> (GG.8) Which customary unit of length is appropriate: inches, feet, or yard
Wednesday	<b>HMH - Estimate Lengths to Solve Problems</b> <b>HMH - Choose a Tool</b>
Thursday	<b>IXL 7WA</b> (HH.1) Measure using a centimeter ruler <b>IXL KBA</b> Compare lengths in centimeters
Friday	Students will take home a <b>meter tape</b> to complete the estimating measurements around the house homework.

# Units of length (centimeters and meters)

Grade 2 Measurement Worksheet

Fill in the proper units (**cm** or **m**) for each measurement.

1 meter = 100 centimeters

Length of a guitar



1 \_\_\_\_\_

Length of a tie



90 \_\_\_\_\_

Height of a wedding cake



1 \_\_\_\_\_

Length of a peanut



3 \_\_\_\_\_

Width of a postcard



14 \_\_\_\_\_

Length of a blue box



70 \_\_\_\_\_

# Units of length (centimeters and meters)

## Grade 2 Measurement Worksheet

Fill in the proper units (**cm** or **m**) for each measurement.

1 meter = 100 centimeters

Length of a carrot




32 \_\_\_\_\_

Height of a shaker



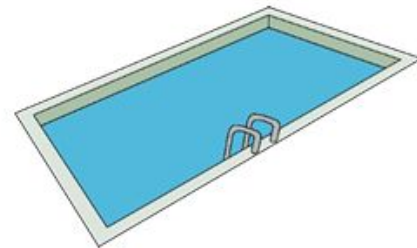
8 \_\_\_\_\_

Length of a dump truck



11 \_\_\_\_\_

Length of a swimming pool



40 \_\_\_\_\_

Length of a shovel



1 \_\_\_\_\_

Width of a house



15 \_\_\_\_\_

Fill in the proper units (**cm** or **m**) for each measurement.


1 meter = 100 centimeters

Length of a pair of sunglasses



20 \_\_\_\_\_

Length of an alligator



2 \_\_\_\_\_

Length of a city train



65 \_\_\_\_\_

Length of a car



4 \_\_\_\_\_

Height of an ostrich



1 \_\_\_\_\_

Length of a toothbrush



18 \_\_\_\_\_