



Homework Log



Week of: November 17th. - 21th



Day	Homework	Reminders
Monday 11/17	How many dots are there? Write the number	
Tuesday 11/18	Fall time counting	
Wednesday 11/19	Fall Patterns	
Thursday 11/20	Number practice: 11	
Friday 11/21	<u>*Attendance needs to be signed</u>	<u>NO SCHOOL</u> Next week 

How many dots (●) are there? Write the number in each box.


● ● ●	● ● ● ● ●	●	● ● ● ●	● ●

● ● ● ● ● ● ● ●	● ● ● ● ● ●	● ● ● ● ● ● ● ● ●	● ● ● ● ● ● ● ● ● ●	● ● ● ● ● ● ●

● ● ● ● ●	● ●	● ● ●	●	● ● ● ●

● ● ● ● ● ●	● ● ● ● ● ● ● ● ● ●	● ● ● ● ● ● ● ●	● ● ● ● ● ● ●	● ● ● ● ● ● ● ● ●





Name _____



















Fall Time Counting

Directions: Count the items. Write the number.
Color the pictures.


Name: _____

Fall Patterns

Use the pictures to complete the patterns

Rainey Cloud Classrooms



Name _____

Date _____

Numbers Practice



Trace and write the number.

1	1	1	1	1	1	1	1	1	1	1
---	---	---	---	---	---	---	---	---	---	---

--	--	--	--	--	--	--	--	--	--	--

Color the number word.

eleven

Show the number on the ten frame.

Color 11 circles.

○	○	○	○
○	○	○	○
○	○	○	○
○	○	○	○
○	○	○	○