



School to Home Letter

Dear Students and Parents,

Smile!

During the next few days, our math class will be working on counting and representing numbers 10 to 15. You can expect to see homework that reviews counting, using a number frame and a worded problem. The instruction for each activity is written at the bottom of each page.

Please download, print and staple this packet. Students should do one page of this packet each evening. It should take them 5 days to complete the packet. They should use the boxes below to check off each day the homework is completed. When the packet is completed, they should put it in their **green** folder and take it to school on Monday October 28, **2025**.

Warmly,

Kadisha Mills, Ph.D.

Name: _____ Class: _____



| | | | | |
|--------|---------|-----------|----------|--------|
| Monday | Tuesday | Wednesday | Thursday | Friday |
| | | | | |

Name _____

LESSON 7.2
Practice and Homework

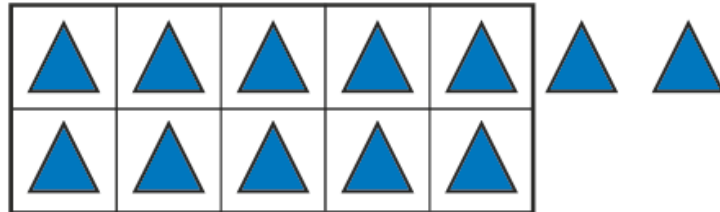
Count and Represent 11 and 12

Go Online

Interactive Examples



12



© Houghton Mifflin Harcourt Publishing Company

DIRECTIONS 1–2. Count and tell how many. Practice writing the number.

Name _____

LESSON 7.4
Practice and Homework


Count and Represent 13 and 14

Go Online

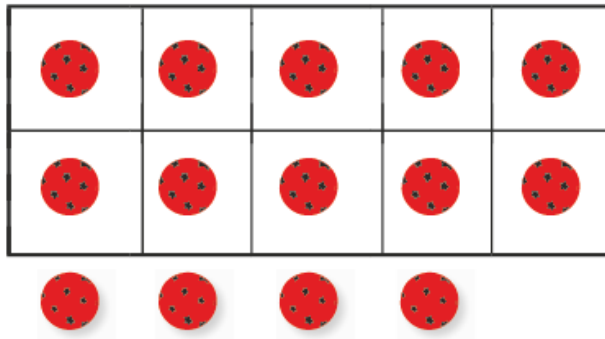
Interactive Examples



13



14




© Houghton Mifflin Harcourt Publishing Company

DIRECTIONS 1–2. Count and tell how many. Practice writing the number.

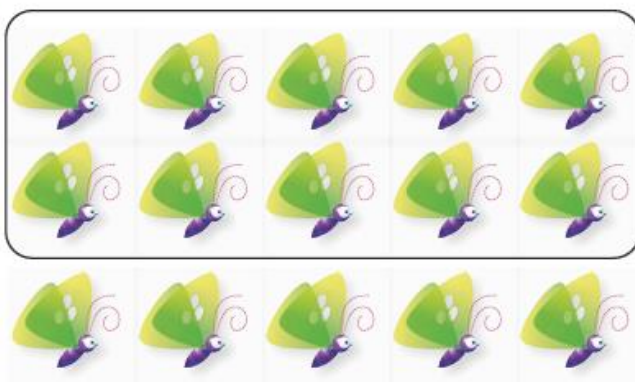
Lesson Check

3



- 14
- 15


4



- 15
- 5

Spiral Review

5



- 3
- 13

DIRECTIONS Choose the correct answer. 3. Count the turtles. How many are there? 4. Count the butterflies. How many are there? 5. Count the ants. How many are there?

Name _____

One More and One Less to 15

Go Online

Interactive Examples

1

_____ dogs

© Houghton Mifflin Harcourt Publishing Company

DIRECTIONS 1. There are 15 dogs playing at the dog park. One dog goes home. How many dogs are playing at the dog park now? Draw to solve the problem. Write the number.

Name _____

Share and Show

2 

_____ children

© Houghton Mifflin Harcourt Publishing Company

DIRECTIONS 2. There are 12 children in the drink line. The snack line has one more child than the drink line. How many children are in the snack line? Draw to solve the problem. Write the number.