

Name: _____ Section: _____


First Grade

American Math Homework #8



Hello Scholars and Parents. This week in class, we will be completing our STEM challenge. Our homework will be a review of Chapters 1 and 2.

Vocabulary



Notes

Students **MUST** prove and show all their work. If additional space is needed, please feel free to attach lined paper to the homework packet. **Failure to show your work will result in a lower grade.** Please complete the homework to the best of your abilities.

<u>Monday</u>	October 13 th – Page 31	_____
<u>Tuesday</u>	October 14 th – Page 32	_____
<u>Wednesday</u>	October 15 th – Page 45	_____
<u>Thursday</u>	October 16 th – Page 46	_____
<u>Friday</u>	October 17 th – Page 84	_____

Name _____

Homework

1. Count backward by ones to write the missing numbers.

_____, _____, _____, _____, _____, 86

2. Count forward by tens to write the missing numbers.

27, _____, _____, _____, _____, _____

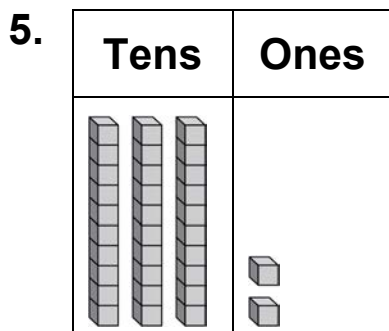
3. Count by twos to write the missing numbers.

4, _____, _____, 10, _____, _____

Complete the sentence.

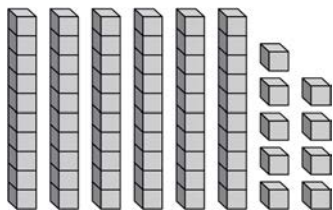


_____ tens and _____ ones is _____.



_____ tens and _____ ones is _____.

6. Write the number to show how many.



_____ cubes

Name _____

Homework

(continued)

7. You need 34 invitations for a party. You have 28. How many more invitations do you need?

_____ more invitations


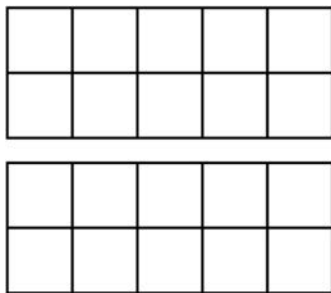
8. A store has 53 masks. A shelf can hold 10 masks. How many shelves can the store fill?

_____ shelves

9. Write the number in standard form and expanded form.

 eleven
 _____ + _____

10. Color to show the number. Complete the sentence.



_____ ten and _____ ones is _____.

11. Circle all of the ways that show 74.

7 + 4

7 tens and 4 ones

6 tens and 14 ones

10 + 64

74 tens and 0 ones

47 ones

Name _____

Homework Review & Refresh

1. Model 45

Tens	Ones

____ tens and ____ ones
is 45.

Model 72

Tens	Ones

____ tens and ____ ones
is 72.

2. What number is
6 tens + 3 ones?

3. ____ + 8 = 98

4. I am greater than
45 and less than
50. I have 7 ones.
What number am I?

5. Make a quick sketch.

38

Tens	Ones

6. Match.

1 ten and 5 ones 55

5 tens and 1 one 11

1 ten and 1 one 15

5 tens and 5 ones 51

7. Make a quick sketch. Complete the sentence.

35

Tens	Ones

____ is ____ tens and ____ ones.

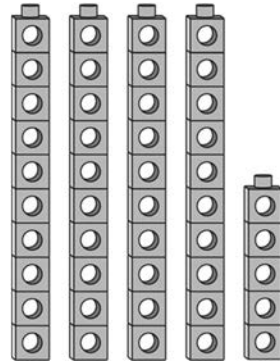
Name _____

Homework Review & Refresh (continued)

8. Write the number in standard form and expanded form.

Standard form:

Expanded form _____ + _____ = _____





9. $70 + 9 =$ _____

10. _____ + 5 = 35

11. $10 +$ _____ = 18

12. $92 =$ _____ + _____
tens ones

13. What number is modeled by this quick sketch?

Tens	Ones
	

14. Complete the sentence.

56 is _____ tens and _____ ones.

15. Complete the sentence for the number 67.

_____ tens = _____

_____ ones = _____

_____ tens and _____ ones

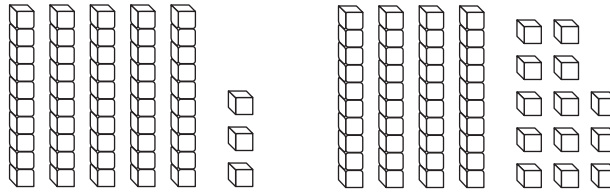
is _____.

16. Your friend counts by fives starting at 35. Is your friend correct? How do you know?

35, 40, 45, 50, 60, 65

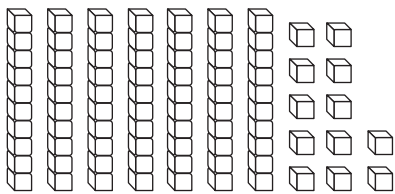
Lesson Check

4. What number does each model show?
Write the numbers.




$$\underline{\hspace{2cm}} = \underline{\hspace{2cm}}$$

5. What number does the model show?
Write the number.



Spiral Review

6. Use the model. Write the number three different ways.



 ten ones

$$\underline{\hspace{2cm}} + \underline{\hspace{2cm}} = \underline{\hspace{2cm}}$$

7. How many tens and ones make 19?
Write the numbers.

 ten ones

