



School to Home Letter

Dear Students and Parents,

Smile, you are loved!

Students, during the next few days, our math class will be learning how to Compare Numbers Through 5. You can expect to see homework that provides practice in counting, comparing and matching sets with the same, less than and greater than number of objects. You will also see homework with ordinal positions through 5th. The instruction for each activity is written at the bottom of each page.






Parents, please download, print and staple this packet. Students should do one page of this packet each evening. It should take them 5 days to complete the packet. They should use the boxes below to check off each day the homework is completed. When the packet is complete, they should put it in their **green** folder and take it to school on Monday September 16, 2024. They will have a test on Friday.

You are welcome to contact: Kadisha.mills@archimedean.org.

Warmly,

Kadisha Mills, Ph.D.

Name: _____ Class: _____


				
Monday	Tuesday	Wednesday	Thursday	Friday


Name _____

Same Number

Go Online

Interactive Examples






DIRECTIONS 1. Compare the sets of animals. Is the number of dolphins equal to the number of turtles? Count how many dolphins. Write the number. Count how many turtles. Write the number. Tell a friend what you know about the number of objects in each set.

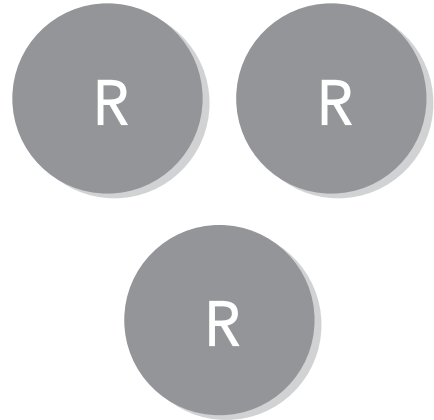
Name _____

Greater Than

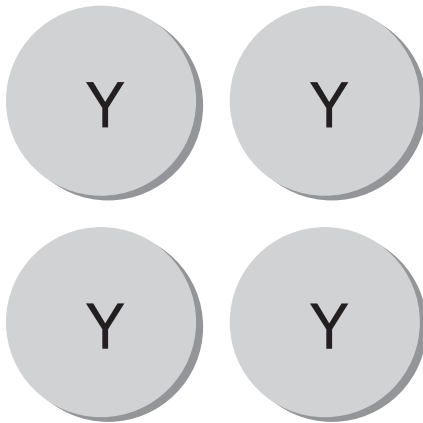
Go Online

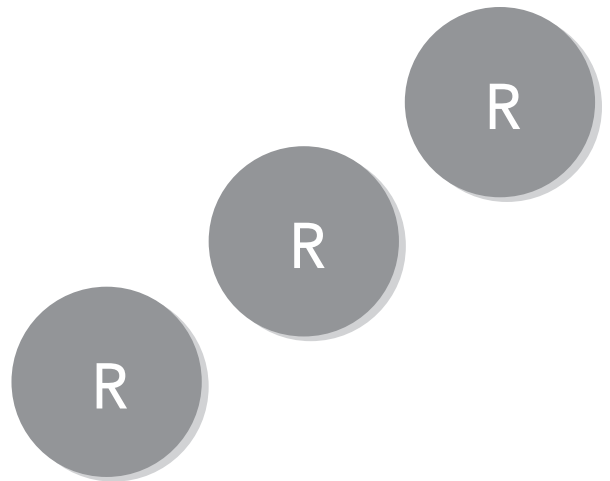
Interactive Examples





2






DIRECTIONS 1–2. Place counters as shown. Y is for yellow, and R is for red. Count and tell how many are in each set. Write the numbers. Compare the numbers. Circle the number that is greater.


Name _____


Less Than


Go Online

Interactive Examples









DIRECTIONS 1–2. Count and tell how many are in each set. Write the numbers. Compare the numbers. Circle the number that is less.


Name _____

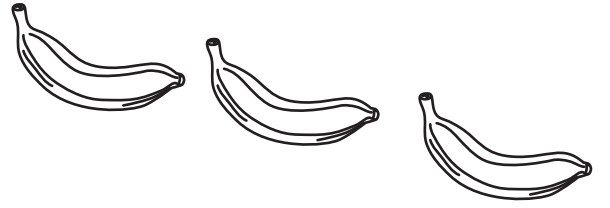
Compare by Counting Sets to 5

Go Online

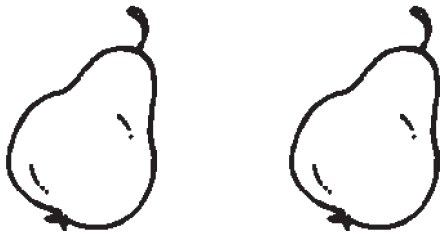
Interactive Examples


1







2





3





DIRECTIONS 1–2. Count how many pieces of fruit are in each set. Write the numbers. Compare the numbers. Circle the number that is greater. 3. Count how many pieces of fruit are in each set. Write the numbers. Compare the numbers. Circle the number that is less.


Name _____

Ordinal Numbers to 5th

Go Online


Interactive Examples

1




first

2



first

3



first

4



first

DIRECTIONS 1. Circle the first duck. Draw a line under the fifth duck. 2. Circle the second dog. Draw a line under the fifth dog. 3. Circle the third sheep. Draw a line under the fourth sheep. 4. Circle the first turtle. Draw a line under the fourth turtle.