


Homework Log



Week of: May 5th. – 9th.h

Day	Homework	Reminders
Monday 5/5	Add the dots	
Tuesday 5/6	Addition	
Wednesday 5/7	Add the candies	
Thursday 5/8	Write the numbers 1-30	
Friday 5/9		

Name _____ Add.
 Write how many dots in each domino and then add.
 write the sum.

$$\begin{array}{|c|} \hline \cdot \\ \hline \end{array} + \begin{array}{|c|} \hline \cdot \\ \hline \end{array} =$$

$$\begin{array}{|c|} \hline \cdot \cdot \\ \cdot \cdot \\ \hline \end{array} + \begin{array}{|c|} \hline \cdot \\ \hline \end{array} =$$

$$\begin{array}{|c|} \hline \cdot \\ \cdot \\ \hline \end{array} + \begin{array}{|c|} \hline \cdot \\ \hline \end{array} =$$

$$\begin{array}{|c|} \hline \cdot \\ \hline \end{array} + \begin{array}{|c|} \hline \cdot \cdot \\ \cdot \cdot \\ \hline \end{array} =$$

$$\begin{array}{|c|} \hline \cdot \\ \cdot \\ \cdot \\ \hline \end{array} + \begin{array}{|c|} \hline \cdot \\ \cdot \\ \hline \end{array} =$$

$$\begin{array}{|c|} \hline \cdot \\ \cdot \\ \hline \end{array} + \begin{array}{|c|} \hline \cdot \cdot \\ \cdot \\ \hline \end{array} =$$


$$\begin{array}{|c|} \hline \cdot \\ \cdot \\ \cdot \\ \hline \end{array} + \begin{array}{|c|} \hline \cdot \\ \hline \end{array} =$$

$$\begin{array}{|c|} \hline \cdot \\ \hline \end{array} + \begin{array}{|c|} \hline \cdot \\ \cdot \\ \cdot \\ \hline \end{array} =$$

$$\begin{array}{|c|} \hline \cdot \\ \hline \end{array} + \begin{array}{|c|} \hline \cdot \\ \cdot \\ \hline \end{array} =$$


$$\begin{array}{|c|} \hline \cdot \cdot \\ \cdot \cdot \\ \hline \end{array} + \begin{array}{|c|} \hline \cdot \\ \hline \end{array} =$$

Addition




2

+




3

=




4

+




2

=




4

+



3

=



2

+




2


=

Name _____

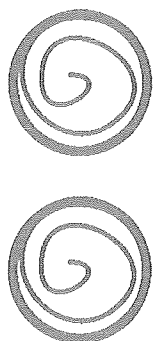

Add the candies. Write the sum in the candy bag.




+





=



+





=




+




=



+



=



Draw a picture with details

Write the numbers from 1-30

