


Archimedean PreK End of Year Study Guide


2024-2025

MATH

- Count to 1-30
- Identify numbers 0-30
- Identify colors (red, blue, orange, yellow, green, orange, purple, pink, white, brown, black)
- Creating sets up to 10
- Shape Identification:
- 2-D square; triangle, circle, rectangle, heart diamond, oval
- 3-D cube; cylinder, cone, sphere, rectangular prism
- Patterns: AB, ABB, ABC
- Simple addition & subtraction



Homework Log




Week of: April 28th. – May 2nd.

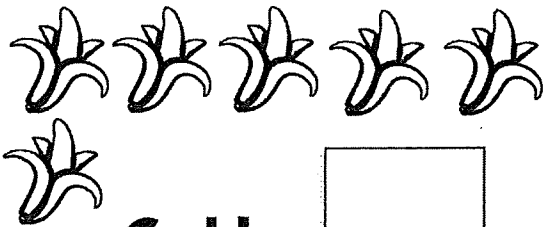
| Day | Homework | Reminders |
|-------------------|------------------------------|-----------|
| Monday 4/28 | Gone Bananas for Subtraction | |
| Tuesday 4/29 | Add | |
| Wednesday 4/30 | Subtraction Sentences | |
| Thursday 5/1 | Write the numbers 1-30 | |
| Friday 5/21 | | |

• Put an "x" on the bananas you are subtracting.


Gone Bananas for Subtraction




Name: _____



$6-4=$



$7-2=$




$8-3=$



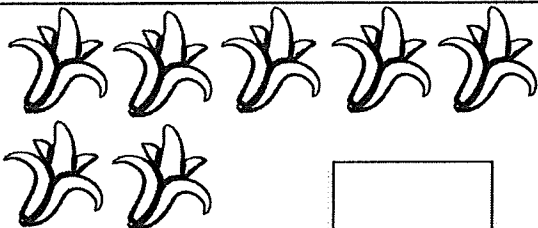
$5-1=$




$4-2=$



$6-3=$



$7-6=$

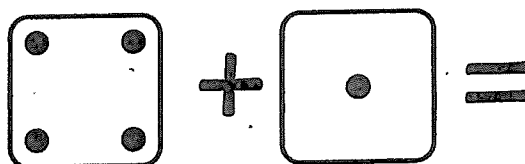
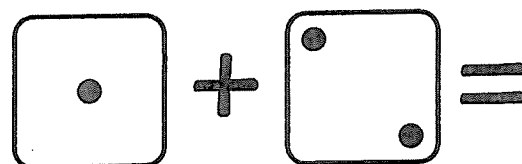
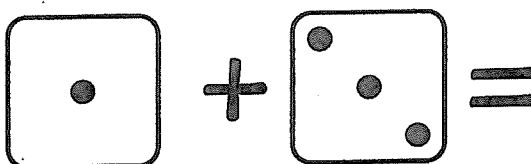
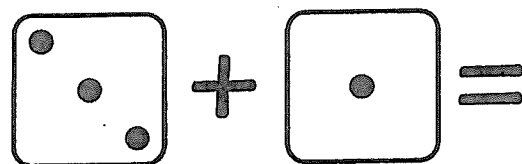
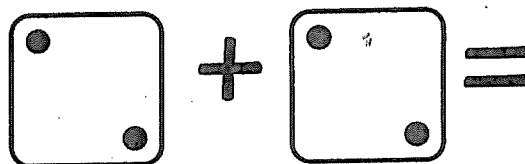
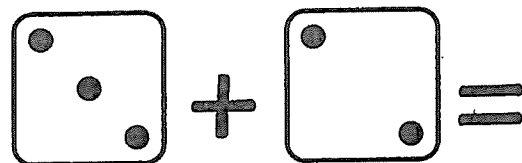
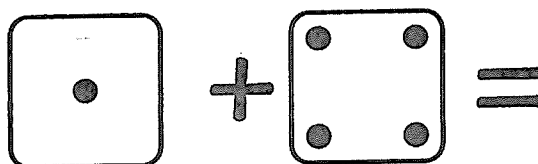
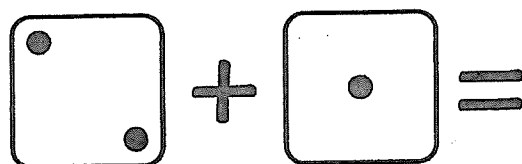
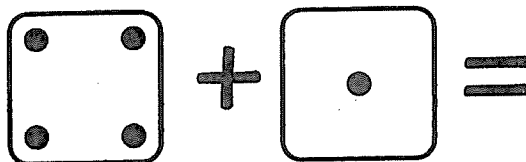
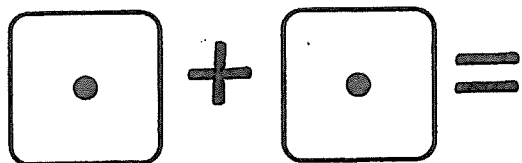


$8-1=$

Name _____

Add.

Write how many dots in each domino and then add.
Write the sum.

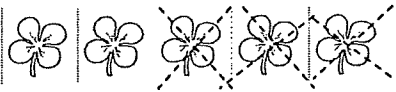



Name: _____

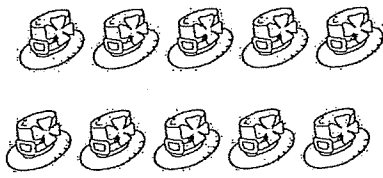
Directions: Count the pictures. Cross some out. Count how many are left.

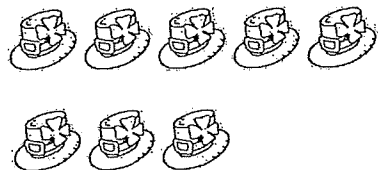
Subtraction Sentences


**cross out the objects you are subtracting.*


1. 
 $5 - 3 = 2$

4. 
 $5 - 2 = \square$

2. 
 $10 - 5 = \square$

5. 
 $8 - 1 = \square$


3. 
 $7 - 3 = \square$

6. 
 $9 - 4 = \square$

7. Teddy made 5 cakes.

He ate 2 cakes.

How many cakes does he have left?


 $5 - 2 = \square$

Draw a picture with details

Write the numbers from 1-30

