





# Homework Log




Week of: April 21<sup>st</sup>. – 25<sup>th</sup>.

Day	Homework	Reminders
Monday 4/21	Gone Bananas for Subtraction	
Tuesday 4/22	Add within 10	
Wednesday 4/23	Picture Addition	
Thursday 4/24	Color	
Friday 4/25		


# Gone Bananas for Subtraction




Name: \_\_\_\_\_



$$6-0=$$



$$7-0=$$



$$8-0=$$



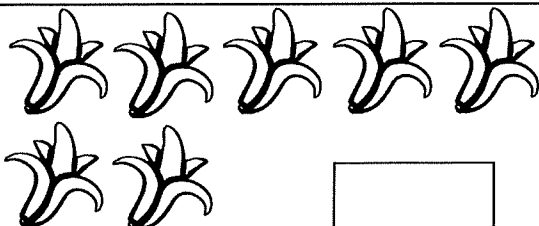
$$5-0=$$



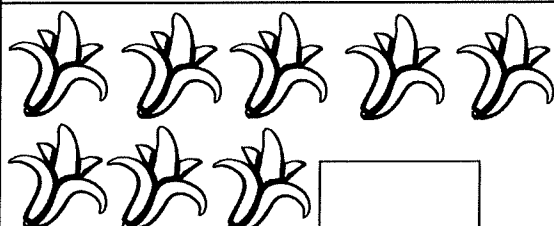
$$4-0=$$



$$6-0=$$



$$7-0=$$



$$8-0=$$

Tuesday

Name: \_\_\_\_\_

COMMON CORE | K.OA.1

# Add Within 10

1

$$\begin{array}{|c|} \hline \bullet \bullet \bullet \bullet \bullet \\ \hline \end{array} + \begin{array}{|c|} \hline \bullet \\ \hline \end{array} = \begin{array}{|c|} \hline 6 \\ \hline \end{array}$$

2

$$\begin{array}{|c|} \hline \bullet \\ \hline \end{array} + \begin{array}{|c|} \hline \bullet \bullet \bullet \\ \hline \end{array} = \begin{array}{|c|} \hline \\ \hline \end{array}$$

3

$$\begin{array}{|c|} \hline \bullet \\ \hline \end{array} + \begin{array}{|c|} \hline \bullet \bullet \bullet \bullet \bullet \\ \hline \end{array} = \begin{array}{|c|} \hline \\ \hline \end{array}$$

4

$$\begin{array}{|c|} \hline \bullet \bullet \bullet \\ \hline \end{array} + \begin{array}{|c|} \hline \bullet \bullet \bullet \\ \hline \end{array} = \begin{array}{|c|} \hline \\ \hline \end{array}$$

5

$$\begin{array}{|c|} \hline \bullet \bullet \bullet \bullet \bullet \\ \hline \end{array} + \begin{array}{|c|} \hline \bullet \bullet \bullet \bullet \bullet \\ \hline \end{array} = \begin{array}{|c|} \hline \\ \hline \end{array}$$

6

$$\begin{array}{|c|} \hline \bullet \bullet \bullet \bullet \bullet \\ \hline \end{array} + \begin{array}{|c|} \hline \bullet \bullet \bullet \bullet \bullet \\ \hline \end{array} = \begin{array}{|c|} \hline \\ \hline \end{array}$$


1 2 3 4 5 6 7 8 9 10

Look at the objects in each set, then add the objects and write the answer in the space provided.

Name: \_\_\_\_\_


## Picture Addition

Count, add and write the correct number in the box





4

+




2

=



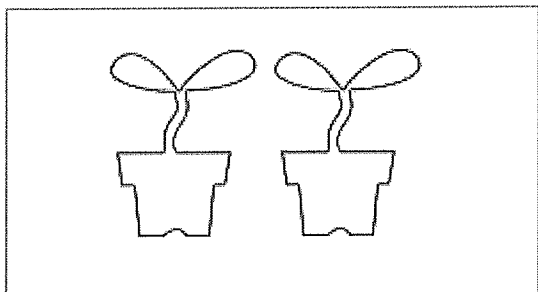

3

+



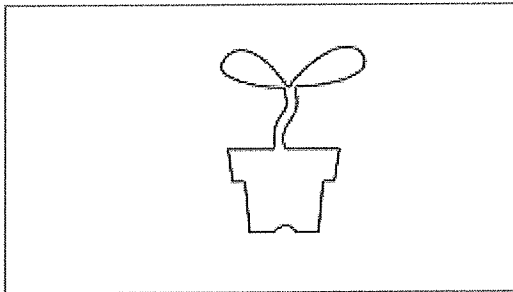
3

=





2

+




1

=




4

+




3

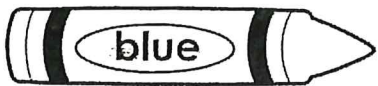
=



Color



1



2



3



4



5

