




Homework Log



Week of: April 14th. – 18th.

| Day | Homework | Reminders |
|-------------------|------------------------------|-----------|
| Monday 4/14 | Simple Addition | |
| Tuesday 4/15 | Simple Subtraction | |
| Wednesday 4/16 | Number words | |
| Thursday 4/27 | Gone Bananas for Subtraction | |
| Friday 4/18 | | |


Simple Addition +1

Name: _____

1.) $1 + 1 =$ _____




5.) $5 + 1 =$ _____



2.) $2 + 1 =$ _____




6.) $6 + 1 =$ _____



3.) $3 + 1 =$ _____




7.) $7 + 1 =$ _____




4.) $4 + 1 =$ _____



8.) $8 + 1 =$ _____





Name _____




$$5 - 1 = \underline{\quad}$$



$$3 - 3 = \underline{\quad}$$




$$10 - 2 = \underline{\quad}$$



$$7 - 4 = \underline{\quad}$$



$$3 - 2 = \underline{\quad}$$



$$8 - 5 = \underline{\quad}$$



$$6 - 3 = \underline{\quad}$$



$$2 - 1 = \underline{\quad}$$




$$4 - 1 = \underline{\quad}$$



$$9 - 2 = \underline{\quad}$$


Name: _____


Number Words

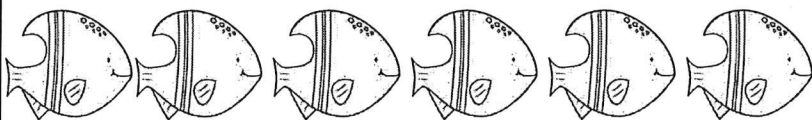



| | | | |
|-------|------|------|-------|
| three | six | four | two |
| seven | five | nine | eight |


Count the fish in each row and write the number word beside them.




















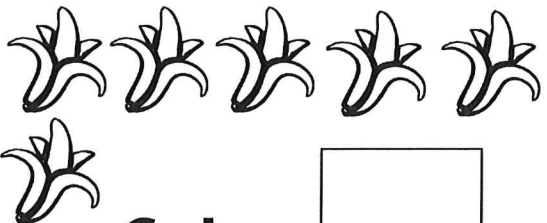




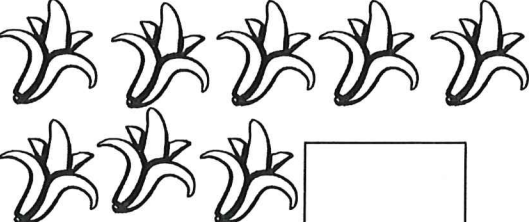

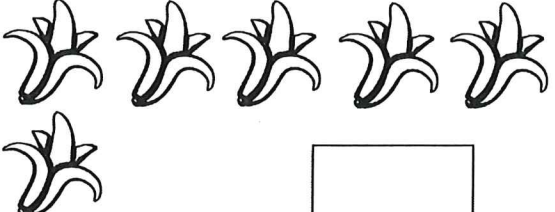
©Twee Resources

cross out/put an X on the banana you are subtracting/taking away.

Gone Bananas for Subtraction



Name: _____

| | |
|--|---|
|  $6-1=$ <input type="text"/> |  $7-1=$ <input type="text"/> |
|  $8-1=$ <input type="text"/> |  $5-1=$ <input type="text"/> |
|  $4-1=$ <input type="text"/> |  $8-1=$ <input type="text"/> |
|  $3-1=$ <input type="text"/> |  $6-1=$ <input type="text"/> |