

Όνομα: _____



Ms. Maria Lafazanoglou

maria.lafazanoglou@archimedean.org

27th HOMEWORK 03/31-04/04

DUE Day Saturday 04/05

Perimeter, Area, Volume

Περίμετρος, Εμβαδόν, Όγκος

➤ Assessments : No Assessments

Please feel free to contact me with any questions or concerns.

Περίμετρος

$$P = l + w + l + w$$



m

$\frac{5}{3}$ cm



$1\frac{2}{3}$ cm

$$\text{Περίμετρος} = _ + _ + _ + _ = _$$

$\frac{1}{2}$ m



$\frac{1}{2}$ m

$$\text{Περίμετρος} = _ + _ + _ + _ = _$$

$\frac{2}{3}$ in



$\frac{7}{4}$ in

$$\begin{aligned}\text{Περίμετρος} &= _ + _ + _ + _ = _ \\ &= _ + _ + _ + _ = _ \end{aligned}$$


$\frac{2}{5}$ ft



$1\frac{1}{10}$ ft

$$\begin{aligned}\text{Περίμετρος} &= _ + _ + _ + _ = _ \\ &= _ + _ + _ + _ = _ \end{aligned}$$

$\frac{1}{6}$ mm



$\frac{3}{4}$ mm

$$\begin{aligned}\text{Περίμετρος} &= _ + _ + _ + _ = _ \\ &= _ + _ + _ + _ = _ \end{aligned}$$

$\frac{2}{3}$ m



2 m

$$\begin{aligned}\text{Περίμετρος} &= _ + _ + _ + _ = _ \\ &= _ + _ + _ + _ = _ \end{aligned}$$


Εμβαδόν

$$A = l \times w$$



m²

$\frac{2}{3}$ cm



$\frac{5}{3}$ cm

$$\text{Εμβαδόν} = _ \times _ = _$$


$\frac{1}{2}$ m



$\frac{1}{2}$ m

$$\text{Εμβαδόν} = _ \times _ = _$$


$\frac{2}{3}$ in



$2\frac{7}{4}$ in

$$\begin{aligned}\text{Εμβαδόν} &= _ \times _ = _ \\ &= _ \times _ = _ \end{aligned}$$

$1\frac{2}{5}$ ft



$2\frac{1}{10}$ ft

$$\begin{aligned}\text{Εμβαδόν} &= _ \times _ = _ \\ &= _ \times _ = _ \end{aligned}$$

2 mm



$3\frac{3}{4}$ mm

$$\begin{aligned}\text{Εμβαδόν} &= _ \times _ = _ \\ &= _ \times _ = _ \end{aligned}$$

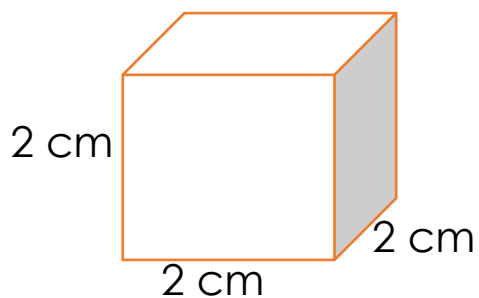
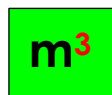

$\frac{2}{3}$ m



2 m

$$\text{Εμβαδόν} = _ \times _ = _$$

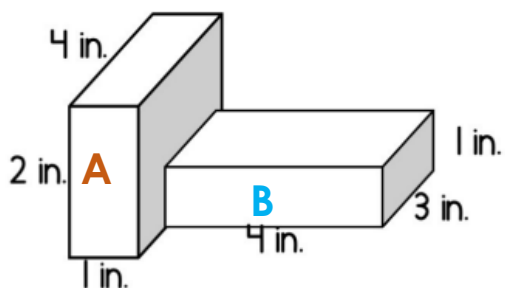
Όγκος $l \times w \times h$



Όγκος = $___ \times ___ \times ___ = ___$



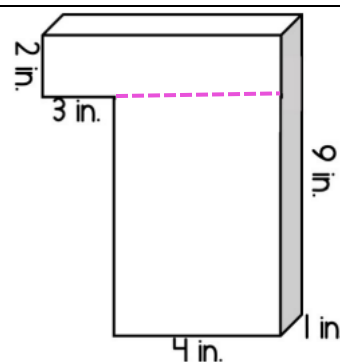
Όγκος = $___ \times ___ \times ___ = ___$



Όγκος A = $___ \times ___ \times ___ = ___$

Όγκος B = $___ \times ___ \times ___ = ___$

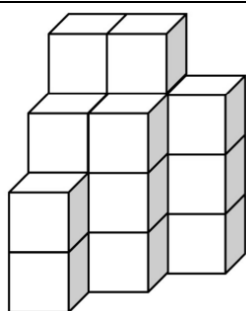
Όγκος = $___ + ___ = ___$



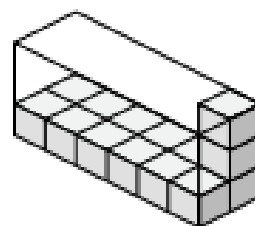
Όγκος A = $___ \times ___ \times ___ = ___$

Όγκος B = $___ \times ___ \times ___ = ___$

Όγκος = $___ + ___ = ___$



Όγκος = $___$



Όγκος = $___$