


1

☐ 70☐ 80☐ 90

2

31	32	33	34	35	36	37		39	40
41		43	44	45	46	47	48	49	50

3

11	12	13		15	16	17	18	19	20
21	22	23	24	25	26		28	29	30

4

71	72	73	74	75	76	77	78	79	80
81	82	83	84		86	87	88	89	90
91	92	93	94	95	96	97	98	99	100

☐ 76☐ 85☐ 94**Directions:**


1. Morgan has these crayons. How many crayons does Morgan have? 2. Which numbers are missing when counting from 31 to 50? Write the missing numbers. 3. Which numbers are missing when counting from 11 to 30? Write the missing numbers. 4. Begin with 71 and count to 100. Which number is missing?

5

11	12	13	14	15	16	17	18	19	
21	22	23	24	25	26	27	28	29	

☐ 11, 21☐ 15, 25☐ 20, 30

6

☐ 50☐ 60☐ 70

7

	7	8	9
--	---	---	---

9

	18	19	20
--	----	----	----

8

2	3	4
---	---	---

10

- ☐ 12
- ☐ 11
- ☐ 10

Directions:

5. Which numbers are missing when counting on from 11? 6. Eric has 6 groups of straws. There are 10 straws in each group. How many straws does Eric have in all? 7. Write the missing number. 8. Circle the number that comes before 3. 9. Write the missing number. 10. What number comes right before 13 when counting backwards?

1 83 84 85 86 87 ____ 89

☐ 78 ☐ 88 ☐ 90

2 14, ____, 16, ____, 18

3 94, 95, ____, 97, 98, 99, ____

4

71	72	73	74	75	76	77	78	79	80
81	82	83	84	85	86	87	88	89	90
91	__	93	94	95	96	97	98	99	100

☐ 29 ☐ 90 ☐ 92

Directions:

1. Which number is missing when counting on? 2. Which numbers are missing when counting on? Fill in the blanks with the correct numbers. 3. Which numbers are missing when counting on? Fill in the blanks with the correct numbers. 4. Which number is missing when counting from 71 to 100?



☐ 17, 18, 19

☐ 18, 19, 17

☐ 19, 17, 18



15, 25, _____, _____



27, 28, 29, _____

☐ 20

☐ 30

☐ 31



50, 60, 70, _____, 90



☐ 41, 42, 43

☐ 41, 42, 44

☐ 14, 41, 42



5, 6, _____, 8






☐ 5





☐ 7





☐ 8





Directions:

5. Which set of numbers shows counting forward by ones? 6. Which numbers come next when counting by tens? Fill in the blanks with the correct numbers. 7. Which number comes next? 8. Which number is missing when counting by tens? Fill in the blank with the correct number. 9. Which shows counting forward by ones? 10. Which number is missing when counting by ones?





1     





   






   





☐ 8 ☐ 12 ☐ 16





2    







   






☐ 6 ☐ 7 ☐ 8

3     





   




   






4      






    

☐ 9 ☐ 10 ☐ 11

5    

6     

☐ 8 ☐ 9 ☐ 10


Directions:

1. How many ducks are shown? 2. How many butterflies are shown? 3. How many cubes are shown?
Write the correct number on the line. 4. How many puppies are shown? 5. How many birds are shown?
Write the correct number on the line. 6. How many balloons are shown?

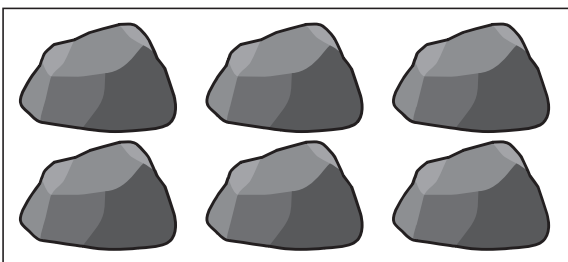
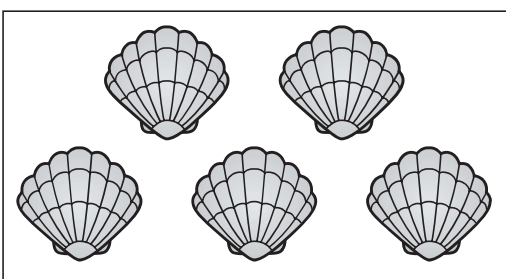
7




8


☐ 7 ☐ 8 ☐ 9

9

• • •

10


☐ 0 ☐ 1 ☐ 2
Directions:

7. How many hats are there? Write the correct number on the line. 8. How many flowers are shown? 9. Alex sees some rocks and shells. How many of each does Alex see? Draw a line from each picture to the correct number. You will not use all the numbers. 10. How many stars are shown?