

Δευτέρα 17 αρτίου 2025 Όνομα _____ Τμήμα: _____

Ελληνικά Μαθηματικά-Greek Math

Γεωμετρία

Dear scholars,
This week we learning:

1. **Classify quadrilaterals**
2. **Line of Symmetry** -draw and identify
3. **Shape patterns**

Dear students,
Please follow this scedule:

3/21

Δευτέρα	3/17	σελ.1-2
Τρίτη	3/18	σελ.3-5
Τετάρτη	3/19	σελ.6
Πέμπτη	3/20	Review

Progress

Friday

Exit Ticket

Επιστροφή

Due date

Κυριακή 3/23
(till 5.00 p.m.)

Λεξιλόγιο:

Quadrilaterals-Τετράπλευρα

ορθογώνιο παραλληλόγραμμο- **rectangle**
πλάγιο παραλληλόγραμμο- **parallelogram**
τετράγωνο- **square**

τραπέζιο- **trapezoid**
ρόμβος- **rhombus**

Άσκηση: Γράφω κάτω από κάθε τετράπλευρο την ονομασία του:

.1

Ορθογώνιο παραλληλόγραμμο

Rectangle

Πλάγιο παραλληλόγραμμο

Parallelogram

Τετράγωνο

Square

Τραπέζιο

Trapezoid

Ρόμβος

Rhombus

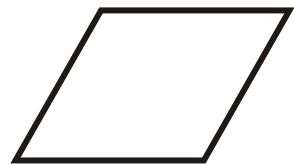
1.



2.




3.



4.




5.




6.



7.



8.



9.



—


μμ -

μμ

 μ


Trapezoid

--



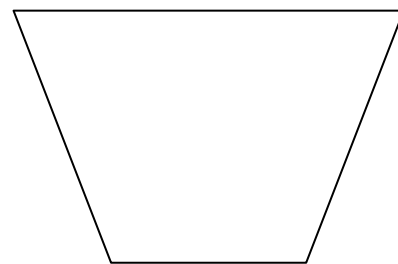
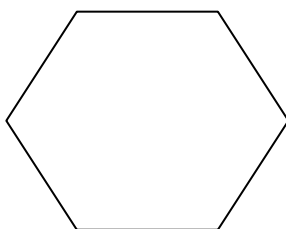


Άξονας συμμετρίας

1. Χρωματίζω τα συμμετρικά σχήματα, χαράζω τον άξονα συμμετρίας.



2. Σχεδιάζω τους άξονες συμμετρίας στα παρακάτω σχήματα.

Αν έχουν περισσότερους από έναν τους σχηματίζω με διαφορετικό χρώμα.


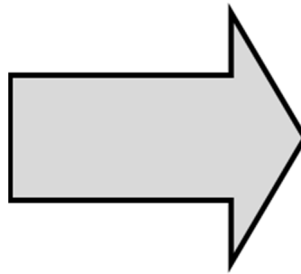
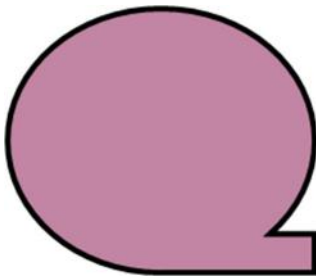

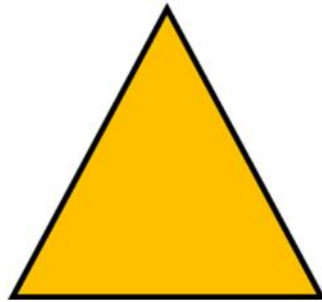




:

 $\mu\mu$

,

..



μμ

μ




x

μμ

.

μ .

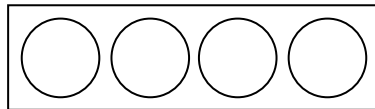
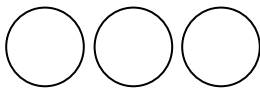
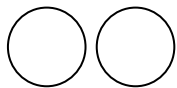
.



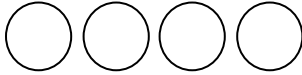
Άσκηση:

Συμπλήρωσε σύμφωνα με το μοτίβο.


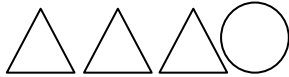
1)



2)




3)



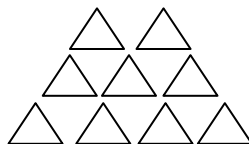
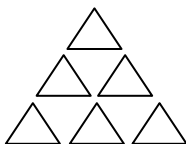
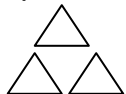
4)




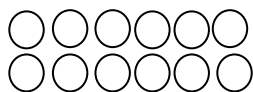
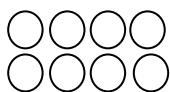
5)






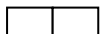
6)




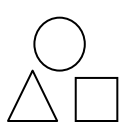
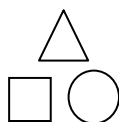
7)



8)



9)



10)

