

Name _____


Chapter Review





☐ 3

☐ 4

☐ 5












DIRECTIONS 1. Choose the answer that tells how many. 2. How many eggs are in the nest? Write the number. 3–4. Look at the sets. Write the number of objects in each set.

5





6











7

DIRECTIONS 5. Look at the sets. Write the number of objects in each set. 6. Start with 5. Write the numbers as you count backward. 7. Write the numbers 1 to 5 in counting order.

Name _____



4 2 1

☐ Yes

☐ No

3 4 5

☐ Yes

☐ No

1 2 3

☐ Yes

☐ No




--	--	--	--	--






DIRECTIONS 8. Are the numbers in counting order? Choose Yes or No. 9. Mateus pulls 5 marbles out of a bag. Draw counters to show the marbles. Write the number. 10. Sam has no apples in a basket. How many apples does Sam have? Write the number. 11. There are 2 apples on the table. Kia takes the 2 apples to a friend. How many apples are on the table now? Write the number.

12



_____ and _____



_____ and _____

13



DIRECTIONS **12.** Show 2 ways to make 5. Color some counters red. Color some counters yellow. Write the numbers. **13.** Write the number that comes after 3 in counting order. Draw counters to show the number.