



Homework Log

Week of: February 3rd - 7th



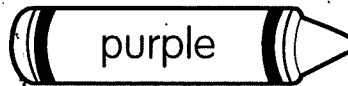


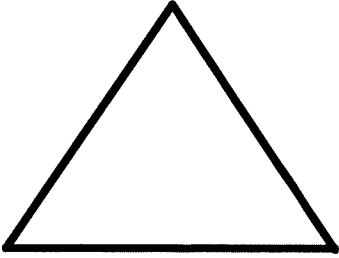


Day	Homework	Reminders
Monday 2/3	Valentines Shapes	
Tuesday 2/4	Valentine 10 frames	
Wednesday 2/5	Missing Numbers	
Thursday 2/6	Greater than (>) OR Less than (<)	
Friday 2/10		

My name _____

Valentine Shapes


Use the key to color the valentine candies below.





Valentine Ten Frames


Name _____

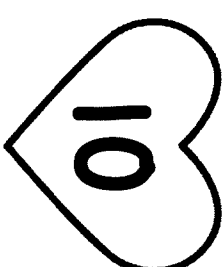
Fill in the ten frames to match the numbers on the hearts.







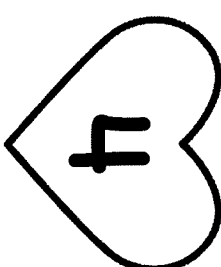


















Name: _____

Missing Numbers

[] 2 3 []

5 [] 7 []

9 10 [] []

[] 14 [] 16

Cut out the missing numbers
and glue them where they
belong.

6

1

13

15

11

4

8

12

Name: _____

COMMON
CORE | K.CC.7

Greater Than $>$ or Less Than $<$

1

$$3 \bigcirc 1$$

2

$$0 \bigcirc 4$$

3

$$6 \bigcirc 8$$

4

$$9 \bigcirc 3$$

5

$$5 \bigcirc 2$$

6

$$8 \bigcirc 7$$

Write a greater than or less than sign to solve the equation.