

Volume of Composite Figures Practice

Instructions: Find the **total** volume of **each** composed figure. Each cube is **one cubic unit** of volume. For the last two questions, decompose using the given lengths.

1.



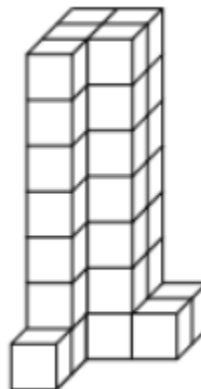
5.



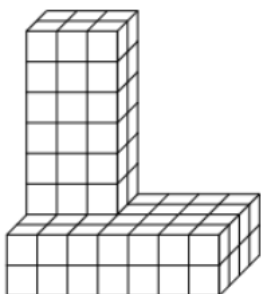
2.



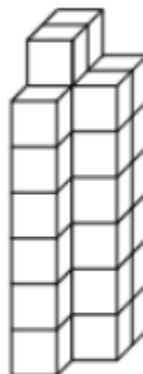
6.



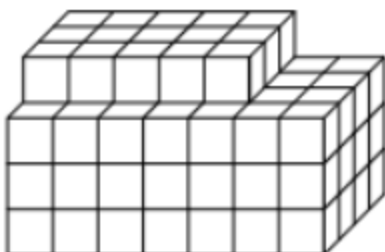
3.



7.

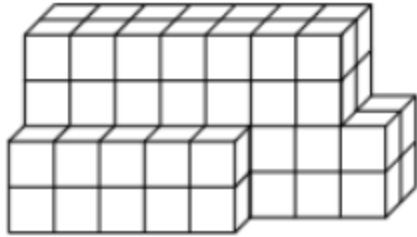


4.

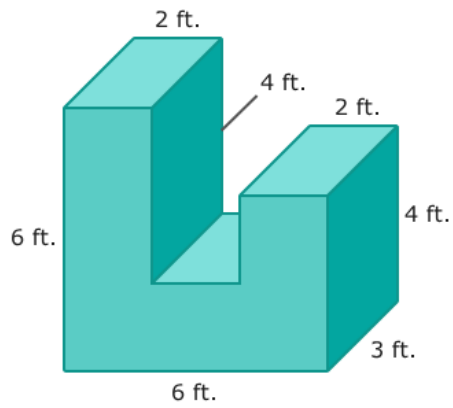


Name: _____ Date: _____ Section: 5 _____

8.



9.



10.

