

**ADMINISTRATION INSTRUCTIONS PAGE**  
**FOR TEACHERS ONLY**

**PLEASE DO NOT INCLUDE THIS**  
**ADMINISTRATION INSTRUCTIONS PAGE**  
**WHEN MAKING COPIES**  
**FOR STUDENTS**

**Administration Instructions**

This Paper-Based Topic Assessment should only be proctored.  
to students who have an IEP/504 that has an accommodation which requires  
the Paper-Based Presentation option.

Name: \_\_\_\_\_

Date: \_\_\_\_\_

1. What time does the clock show?




A. 7:10

B. 3:35

C. 2:35

D. 2:07

2. What time does the clock show?



A. 5:30

B. 5:06

C. half past 6

D. half past 7

3. Jon's class eats lunch at the time shown on the clock below.



At what time does Jon's class eat lunch?

A. 11:03 p.m.

B. 11:15 a.m.

C. 11:15 p.m.

D. 11:03 a.m.

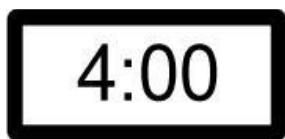
4. What time does the clock show?



- A. 8:40
- B. quarter till 9
- C. 9:45
- D. 10:45

5. Which of the groups of clocks shows the same time?

A.




C.



B.



D.



6. What time does the clock show?




- A. 15 minutes after 8
- B. 3:40
- C. 40 minutes after 2
- D. 2:35

7. What time is shown on the digital clock?





- A. Quarter til twelve
- B. Quarter after eleven
- C. Forty-five minutes after twelve
- D. Forty-five minutes till eleven

8. What time does the clock show?



- A. 11:50
- B. 10:55
- C. 10:50
- D. 9:55

9. Which clock shows ten minutes past eleven o'clock in the morning?



10. The clock shows the time that students in Mrs. Gomez's class go out to P.E. What time do the students go to P.E.?



- A. 2:03 p.m.
- B. 2:15 p.m.
- C. 3:02 p.m.
- D. 3:10 p.m.

---

11. Which clock shows the time of five minutes past nine o'clock in the morning?



---

12. Todd buys a pencil using 3 quarters, 1 dime, and 8 pennies. How much money does Todd use?

A. 83¢

B. 88¢

C. 93¢

D. 98¢

---

13. Ethan has \$31. He buys a toy and has \$17 left. How much money did the toy cost?

A. \$14

B. \$24

C. \$26

D. \$48

---

**14. Helena has 1 quarter, and 1 nickel. Her sister Nancy has 3 pennies and 2 quarters. How much money do Helena and Nancy have in all?**

- A. 40¢**
  - B. 53¢**
  - C. 65¢**
  - D. 83¢**
- 

**15. Alex has 50¢. His mother gives him 2 dimes and 1 nickel to buy a lollipop. How much money does Alex have to buy a lollipop?**

- A. 60¢**
  - B. 65¢**
  - C. 75¢**
  - D. 80¢**
- 

**16. Monica has 85¢. She gives her sister Melissa 2 dimes. How much money does Monica have left?**

- A. 75¢**
- B. 65¢**
- C. 50¢**
- D. 45¢**

17. Kimberly has 2 nickels, 1 dime, and 2 quarters. She wants to buy a highlighter. How many more cents does Kimberly need to buy the highlighter?



A. 20¢

B. 21¢

C. 25¢

D. 27¢

18. Sonya buys a bag of cheddar popcorn for 65¢. She pays with a \$1 bill. How much change will Sonya get?

A. 25¢

B. 30¢

C. 35¢

D. 40¢

19. Winston pays for a movie theater ticket with two \$10 bills, one \$5 bill and four \$1 bills. How much did Winston pay for his movie ticket?

A. \$17

B. \$23

C. \$29

D. \$32

**20. Three sisters are saving money to buy a present for their mother. The present costs \$37. They have saved a \$10 bill, three \$5 bills, and four \$1 bills. How much more money do the sisters need to buy their mother the gift?**

- A. \$29**
  - B. \$18**
  - C. \$11**
  - D. \$8**
- 

**21. Roger has three \$10 bills and four \$1 bills. He has \$16 more than Danny. How much money does Danny have?**

- A. \$18**
  - B. \$32**
  - C. \$34**
  - D. \$41**
- 

**22. Stacey has some money. She lost one \$5 bill and four \$1 bill. She now has \$27. How much money did Stacey have to start?**

- A. \$9**
- B. \$14**
- C. \$27**
- D. \$36**




23. Jenny has 2 quarters and 3 pennies. She finds 2 dimes, 1 nickel, and 1 penny on the floor. How many more cents does Jenny need to make \$1?

- A. 12 more cents
  - B. 16 more cents
  - C. 18 more cents
  - D. 21 more cents
- 

24. Travis has 4 dimes, 1 nickel and 4 pennies. How much more money does Travis need to buy a ruler?

- A. 41¢
- B. 47¢
- C. 49¢
- D. 51¢



You have reached the end of this section.