

Homework Log

Week of: March 18th - 22nd








Day	Homework	Reminders
Monday 3/18	Measure the Flowers	
Tuesday 3/19	Domino Number Bonding	
Wednesday 3/20	Color the parts	
Thursday 3/21	Busy Bees Find Me: #23	
Friday 3/22		

My name _____

Measure the Flowers

Color the cubes to measure how tall each flower is. We did the first one for you.




Now try this! Circle the tallest flower. Put a / on the shortest flower.

Name _____


Date _____

Domino Number Bonding.

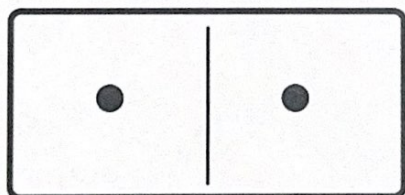
Count the dots on each domino. Write it and add them.



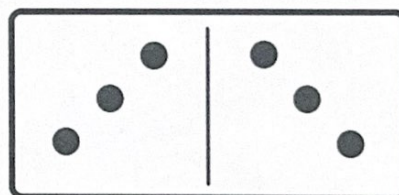
Two small empty circles connected by a line, with a larger empty circle below them, forming a number bond structure for the student to write the numbers.




Two small empty circles connected by a line, with a larger empty circle below them, forming a number bond structure for the student to write the numbers.




Two small empty circles connected by a line, with a larger empty circle below them, forming a number bond structure for the student to write the numbers.



Two small empty circles connected by a line, with a larger empty circle below them, forming a number bond structure for the student to write the numbers.



Two small empty circles connected by a line, with a larger empty circle below them, forming a number bond structure for the student to write the numbers.




Two small empty circles connected by a line, with a larger empty circle below them, forming a number bond structure for the student to write the numbers.

My name _____

Color Plant Parts


Learn the parts of a plant by coloring each of them.



① Color the




flower



② Color the




stem



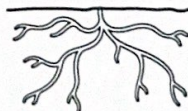
③ Color the



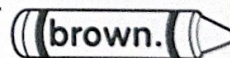
leaves



④ Color the



roots



Name _____

Find the number in the bee's wings. Dot each one.
(color)

Busy Bee
Find me!

23	15	23	21	23	27	23
21	23	12	17	22	23	18
12	23	21	15	22	27	
23	13	23	21	12	23	

Check your work! Did you find all 10?