




American Math News

February 20th – February 23rd

Name _____ Sec _____ Date _____

Announcements & Reminders

- Dear Family, My class started Telling Time this week.
- Homework is due on Thursday, February 22nd in green folder.
- On Friday Feb 23rd kids will make a clock (Activity).



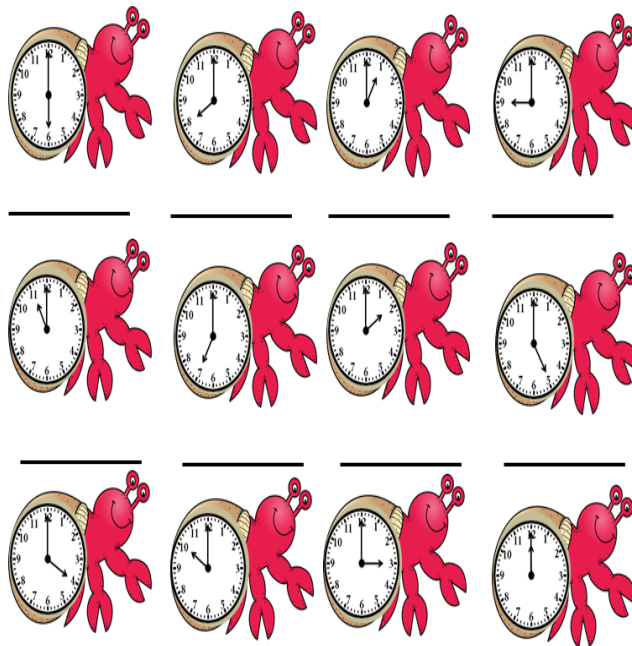
This Week's Homework

Monday	Presidents Day, No School
Tuesday	Pg.1, Pg:2 and Pg.3,Pg.4
Wednesday	Pg.5, Pg.6 and Pg:7,pg.8
Thursday	Homework Due
Friday	Make a clock (Activity)

American Math Vocabulary

Clock, Hour Hand
Minute Hand
Clock Face, Time
A.M., P.M.

What Time is it Mr. Hermit Crab?

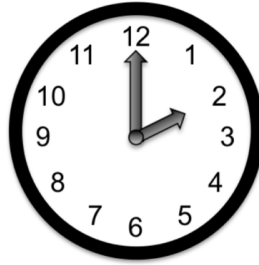


Name: _____


Directions: Write the hour.



_____ O'Clock



_____ O'Clock



_____ O'Clock



_____ O'Clock



_____ O'Clock

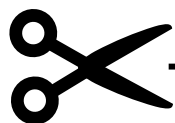





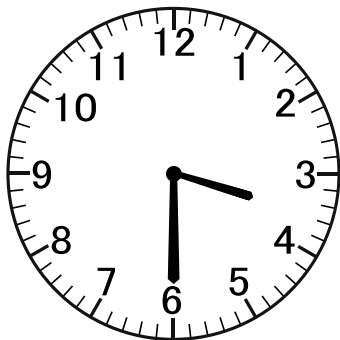


_____ O'Clock

Inspire the Mom

Name: _____

Cut the times and match them to the correct clocks



9:00

1:30

8:30

2:00


3:30

1:00

Name: _____

It's Clock Time!

Can you cut and stick the labels on the clock?



Cut out these labels and stick in the correct place on the clock above.


hour hand


clock face

numbers

minute hand


Write the time shown on the clock. *Escribe la hora indicada en el reloj.*








































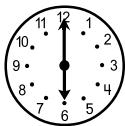

















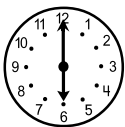



























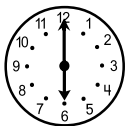



























Name:

First, read the clock and write the correct time.
Then, find the keywords and choose **A.M.** or **P.M.**



Luke went to the beach in the afternoon.

A.M. P.M.



Keith flew his kite in the evening.

A.M. P.M.



Mummy brushes her teeth in the morning.

A.M. P.M.



Mummy is cooking dinner.

A.M. P.M.

Measurement & Data

1. What time is shown on the clock?



2.

What time is shown on the clock?




3.

What time is shown on the clock?



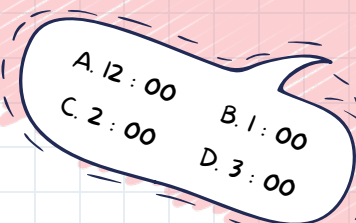
4.

What time is shown on the clock?




5.

What time is shown on the clock?



Telling Time to the Hour

Which digital clock shows the same time as the analog clock? Circle the correct answer.




Name _____

Date _____

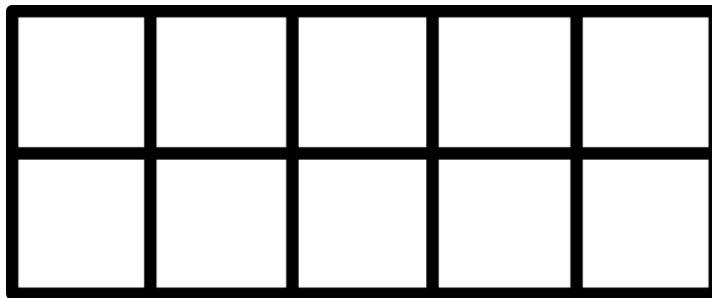
Penguins

There were 4 penguins playing in the water. 3 penguins were playing in the snow. How many penguins were playing in all?



Picture

Ten Frame

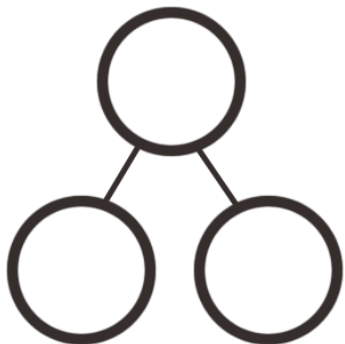


_____ penguins

Equation

Tally Mark Answer

Number Bond



Fact Family

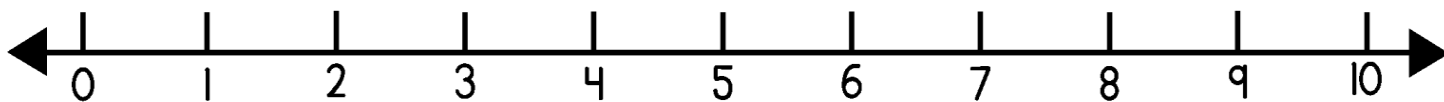
$$\underline{\quad} + \underline{\quad} = \underline{\quad}$$

$$\underline{\quad} - \underline{\quad} = \underline{\quad}$$

$$\underline{\quad} + \underline{\quad} = \underline{\quad}$$

$$\underline{\quad} - \underline{\quad} = \underline{\quad}$$

Number Line



Solve.

$$3 + 2 = \underline{\quad}$$

$$7 - 2 = \underline{\quad}$$

$$9 - 4 = \underline{\quad}$$

$$7 + 2 = \underline{\quad}$$

$$3 - 0 = \underline{\quad}$$

$$8 + 2 = \underline{\quad}$$

$$6 + 3 = \underline{\quad}$$

$$10 - 4 = \underline{\quad}$$