



Homework Log

Week of: February 5th - 9th


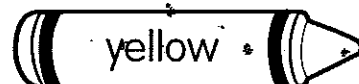
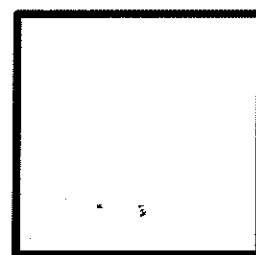
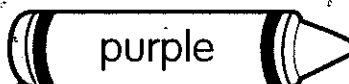


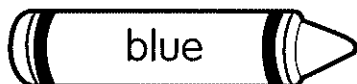
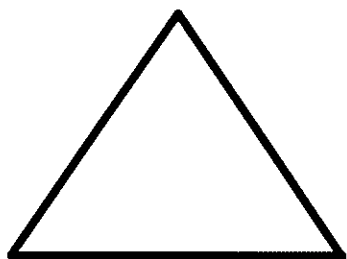


Day	Homework	Reminders
Monday 2/5	Valentine Shapes	
Tuesday 2/6	Valentine 10 Frames	
Wednesday 2/7	Number 19 (practice, make it, find it, solve it, build it)	
Thursday 2/8	Greater than ($>$) OR Less than ($<$)	
Friday 2/9		

recognizing shapes

Valentine Shapes


Use the key to color the valentine candies below.




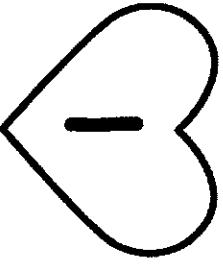
Valentine Ten Frames


Name _____

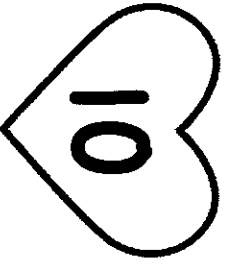
Fill in the ten frames to match the numbers on the hearts.







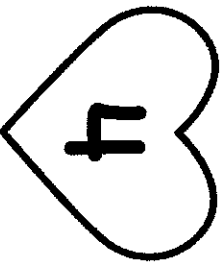



















Name: _____

Let's practice the number 19!



Make it:

Solve it:

$$10 + \underline{\quad} = 19$$

Find it:

11	19	18
13	19	
19	3	12
9	19	

Build it:

Name: _____

COMMON
CORE

K.CC.7

Greater Than $>$ or Less Than $<$

1

$$3 \bigcirc 1$$

2

$$0 \bigcirc 4$$

3

$$6 \bigcirc 8$$

4

$$9 \bigcirc 3$$

5

$$5 \bigcirc 2$$

6

$$8 \bigcirc 7$$

Write a greater than or less than sign to solve the equation.