



American Math News

January 15th - January 18th

Name _____ Section _____ Date _____

Announcements & Reminders

- Homework is due on Thursday January 18th in green folder.
- Chapter 18 Test : **Wednesday Jan 17th**.
- Waggle (HMH): Practice Waggle 30 Minutes per week.

HAVE A GREAT WEEK!



This Week's Homework


Monday	No School
Tuesday	Pg:1, pg.2, Pg.3,pg:4
Wednesday	Pg:5, Pg.6, Pg:7,Pg8 Chapter 18 Test
Thursday	Home work return

Vocabulary

Add,
Is equal to,
Equation
Plus (+)
Sum

Word Problems for Kindergarten

January Edition



Parent Signature _____ Date _____

2















DIRECTIONS 2. Listen to the addition word problem. Use counters. Write the number that shows how many children are playing with the ball. Trace the *plus* symbol and write the number that shows how many children are being added to the group. Trace the *is equal to* symbol and write the number that shows how many children there are now.

Name _____ Date _____

Ten Frames 11-20

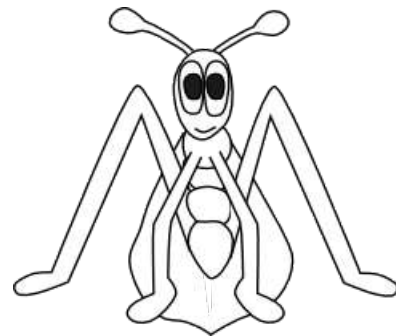
Fill in the ten frame to match the number shown.

<div>15</div> 	<table border="1"><tbody><tr><td></td><td></td><td></td><td></td><td></td></tr><tr><td></td><td></td><td></td><td></td><td></td></tr></tbody></table> <table border="1"><tbody><tr><td></td><td></td><td></td><td></td><td></td></tr><tr><td></td><td></td><td></td><td></td><td></td></tr></tbody></table>																				
<div>20</div> 	<table border="1"><tbody><tr><td></td><td></td><td></td><td></td><td></td></tr><tr><td></td><td></td><td></td><td></td><td></td></tr></tbody></table> <table border="1"><tbody><tr><td></td><td></td><td></td><td></td><td></td></tr><tr><td></td><td></td><td></td><td></td><td></td></tr></tbody></table>																				
<div>16</div> 	<table border="1"><tbody><tr><td></td><td></td><td></td><td></td><td></td></tr><tr><td></td><td></td><td></td><td></td><td></td></tr></tbody></table> <table border="1"><tbody><tr><td></td><td></td><td></td><td></td><td></td></tr><tr><td></td><td></td><td></td><td></td><td></td></tr></tbody></table>																				
<div>19</div> 	<table border="1"><tbody><tr><td></td><td></td><td></td><td></td><td></td></tr><tr><td></td><td></td><td></td><td></td><td></td></tr></tbody></table> <table border="1"><tbody><tr><td></td><td></td><td></td><td></td><td></td></tr><tr><td></td><td></td><td></td><td></td><td></td></tr></tbody></table>																				
<div>18</div> 	<table border="1"><tbody><tr><td></td><td></td><td></td><td></td><td></td></tr><tr><td></td><td></td><td></td><td></td><td></td></tr></tbody></table> <table border="1"><tbody><tr><td></td><td></td><td></td><td></td><td></td></tr><tr><td></td><td></td><td></td><td></td><td></td></tr></tbody></table>																				
<div>13</div> 	<table border="1"><tbody><tr><td></td><td></td><td></td><td></td><td></td></tr><tr><td></td><td></td><td></td><td></td><td></td></tr></tbody></table> <table border="1"><tbody><tr><td></td><td></td><td></td><td></td><td></td></tr><tr><td></td><td></td><td></td><td></td><td></td></tr></tbody></table>																				
<div>12</div> 	<table border="1"><tbody><tr><td></td><td></td><td></td><td></td><td></td></tr><tr><td></td><td></td><td></td><td></td><td></td></tr></tbody></table> <table border="1"><tbody><tr><td></td><td></td><td></td><td></td><td></td></tr><tr><td></td><td></td><td></td><td></td><td></td></tr></tbody></table>																				
<div>17</div> 	<table border="1"><tbody><tr><td></td><td></td><td></td><td></td><td></td></tr><tr><td></td><td></td><td></td><td></td><td></td></tr></tbody></table> <table border="1"><tbody><tr><td></td><td></td><td></td><td></td><td></td></tr><tr><td></td><td></td><td></td><td></td><td></td></tr></tbody></table>																				

Name: _____

Jim has 3 bugs. He got 4 more. How many bugs does he have now?

_____ + _____ = _____



Share and Show



_____	_____	_____
— — — — —	— — — — —	— — — — —
_____	_____	_____

■ ■ ■ ■ ■
■ ■ ■ ■ ■

DIRECTIONS 1. Listen to the addition word problem. Use counters. Write the number that shows how many children are sitting and eating lunch. Trace the *plus* symbol and write the number that shows how many children are being added to the group. Trace the *is equal to* symbol and write the number that shows how many children are having lunch now.

Name: _____

Date: _____

Addition And Subtraction Word Problems to 10

Draw A Picture

Ten frames

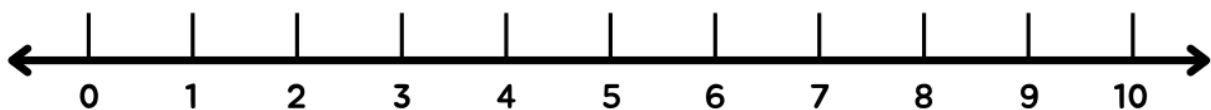
--	--	--	--	--

--	--	--	--	--

The question

Lisa has 9 pencils. She gives 4 pencils to her friends. How many pencils does Lisa have left?

Number Line



Equation

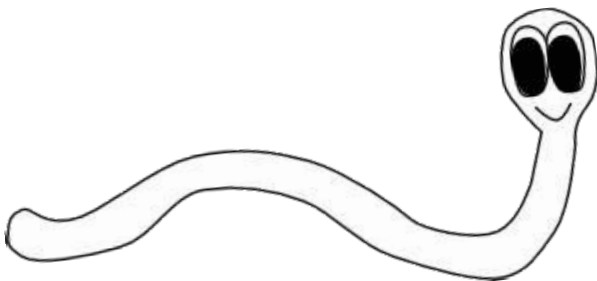
_____ ○ _____ = _____

Answer Statement

Name: _____

Cam has 6 worms. He got
3 more. How many worms
does he have now?

_____ + _____ = _____



Name _____

Addition as Putting Together

Go Online

Interactive Examples



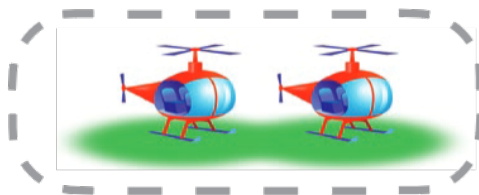




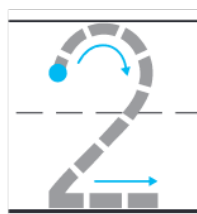
DIRECTIONS 1. Two children are playing with sand. Two more children walk over to play. Write the number that shows how many children are playing. Write the number that shows how many children are being added to the group. Write the number that shows how many children there are now. Trace the symbols to complete the equation.

Share and Show

1




=



+

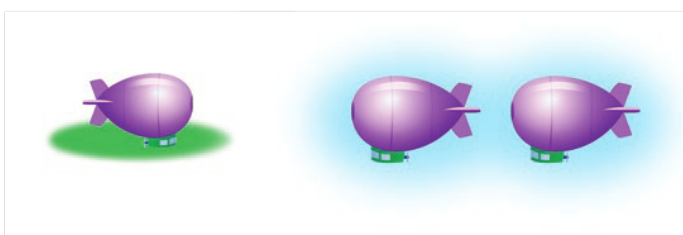
2



+

=

3



+

=

DIRECTIONS 1–3. Listen to the addition word problem. Trace or circle the set you start with. How many are being added to the set? How many are there now? Write and trace the numbers and symbols to complete the addition equation.