

Life Task Card 1:

Which characteristic of life is depicted below?

(pollination)



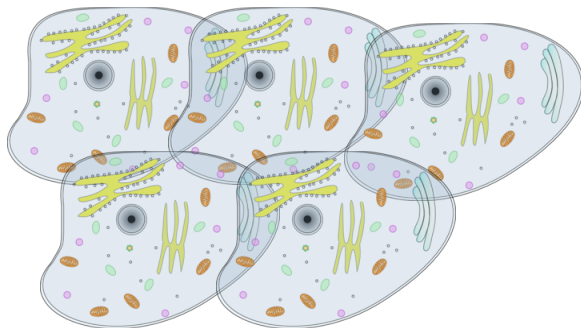
Life Task Card 2:

Which characteristic of life is depicted below?




Life Task Card 3:

Which characteristic of life is depicted below?




Life Task Card 4:

Which characteristic of life is depicted below?



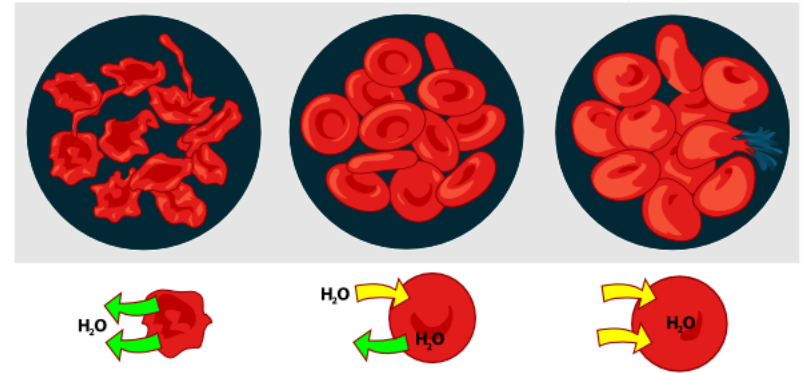
Life Task Card 5:

Which characteristic of life is depicted below?



Life Task Card 6:

Which characteristic of life is depicted below?




Life Task Card 7:

Which characteristic of life is depicted below?



Life Task Card 8:

Which characteristic of life is depicted below?



Life Task Card 9:

What does homeostasis mean?




Life Task Card 10:

Give an example of an organism responding to their environment.




Life Task Card 11:

Is a seed living? How do you know?




Life Task Card 12:

All living organisms use energy.
Where does this energy come from?



Life Task Card 13:

Give an example of a species changing (evolving) over time.



Life Task Card 14:

What does dormant mean? Give an example of an organism that goes through a dormant stage.



Life Task Card 15:

Explain the difference between something that is non-living and something that is dead.



Life Task Card 16:

What is the difference between sexual and asexual reproduction?

