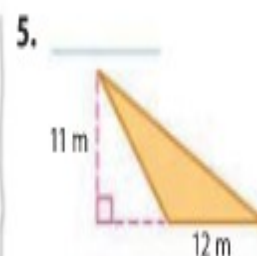
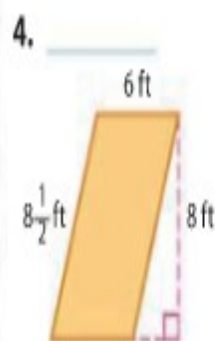
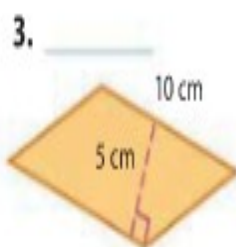


Skills Check and Problem Solving

Find the area of each figure. (Lessons 1 and 2)



Find the missing dimension of each figure. (Lessons 1 and 3)

6. parallelogram: $h = 5\frac{1}{4}$ ft; $A = 12$ ft²

7. trapezoid: $b_1 = 3$ m; $b_2 = 4$ m; $A = 7$ m²

8. **MP Model with Mathematics** A corner table is in the shape of a trapezoid. Find the area of the tabletop. (Lesson 3) _____

