


Homework: Application with Fractions "Show Your Work" for full credit.

Name: _____ Date: _____

4. A box of snack-size cracker packs weighs $28\frac{1}{2}$ ounces. Each snack pack weighs $4\frac{3}{4}$ ounces. How many snack packs are in the box? (Example 5)

5. The soccer team has $16\frac{1}{2}$ boxes of wrapping paper left to sell. If each of the 12 players sells the same amount, how many boxes should each player sell? (Example 5)

6.  **Building on the Essential Question** How do you divide mixed numbers? _____

Rate Yourself!

☐ I understand how to divide mixed numbers.


▶▶ Great! You're ready to move on!


☐ I still have some questions about dividing mixed numbers.

 No Problem! Go online to access a Personal Tutor. 

FOLDABLES Time to update your Foldable!

10. Jamar has an 8-foot-long piece of wood that he wants to cut to build a step stool for his tree house. If each piece is going to be $\frac{5}{6}$ foot long, what is the greatest number of pieces he will be able to use? (Example 6)

-  11 The average adult horse needs $\frac{2}{5}$ bale of hay each day to meet dietary requirements. A horse farm has 44 bales of hay. How many horses can be fed in one day with 44 bales of hay? (Example 6)

12.  **Justify Conclusions** Ethan ordered 4 sub sandwiches for a party. Each $\frac{1}{2}$ sandwich is one serving. Does he have enough to serve 7 friends? How much is leftover or how much more is needed? Explain. _____



