

Name: _____ Class Section: K_____

American Math - Weekly HW 34

Ms. Silvestros

<u>Day:</u>	<u>Assignment:</u>
M	<input type="checkbox"/> Addition p.1 <input type="checkbox"/> Addition p.2 <input type="checkbox"/> Addition p.3
T	<input type="checkbox"/> Addition p.4 <input type="checkbox"/> Subtraction p.1
W	<input type="checkbox"/> Subtraction p.2 <input type="checkbox"/> Subtraction p.3 <input type="checkbox"/> Subtraction p.4
Th	<input type="checkbox"/> One Less p.1 <input type="checkbox"/> One Less p.2 <input type="checkbox"/> One Less p.1
F	<input type="checkbox"/> Turn in HW TODAY!!

NOTES:HW 33

Week of: 5/16/22

Dear Family,
My class is
reviewing and
practicing addition,
subtraction, and
one less.



NOTES:

Due: **Friday**, 5/20/22

Parent Signature: _____

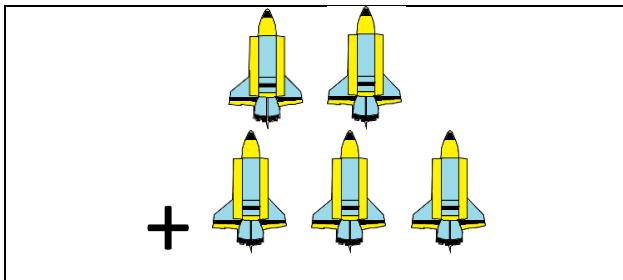
Name

Date




ADDITION SENTENCES TO 10 SHEET 2

Draw lines to match the addition picture to the sum and answer.




$$2 + 3$$

$$= 5$$



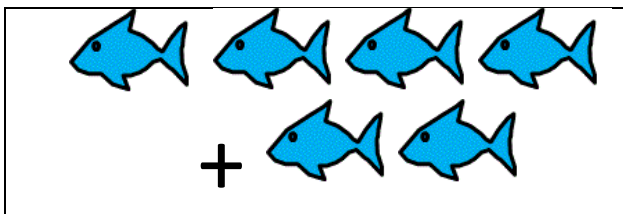
$$4 + 4$$

$$= 8$$




$$3 + 4$$

$$= 7$$



$$5 + 5$$

$$= 10$$



$$4 + 2$$

$$= 6$$

Name

Date



ADDITION SENTENCES TO 10 SHEET 1

Circle the correct sum that matches the picture.

1)				
	2 + 4	3 + 4	4 + 4	3 + 5

2)				
	4 + 3	5 + 3	4 + 4	5 + 4

3)				
	2 + 5	2 + 4	2 + 6	2 + 3

4)				
	2 + 3	3 + 3	3 + 4	4 + 2

5)				
	3 + 5	4 + 4	5 + 5	4 + 5

6)				
	3 + 2	2 + 3	4 + 2	4 + 1

Name _____


Date _____



ADDITION SENTENCES TO 10 SHEET 5

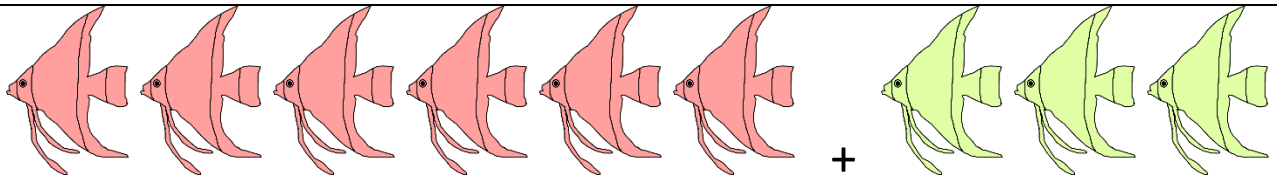
Write the addition sentence that matches each picture.

1)




$$\underline{\quad} + \underline{\quad} = \underline{\quad}$$

2)



$$\underline{\quad} + \underline{\quad} = \underline{\quad}$$

3)



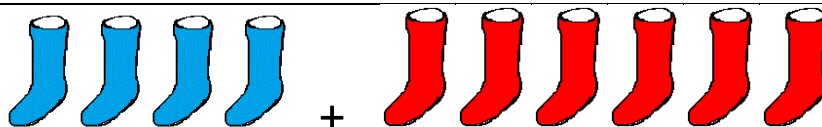
$$\underline{\quad} + \underline{\quad} = \underline{\quad}$$

4)



$$\underline{\quad} + \underline{\quad} = \underline{\quad}$$

5)



$$\underline{\quad} + \underline{\quad} = \underline{\quad}$$

6)



$$\underline{\quad} + \underline{\quad} = \underline{\quad}$$

Name _____

Date _____



ADDITION SENTENCES TO 10 SHEET 6

Write the addition sentence that matches each picture.

1)



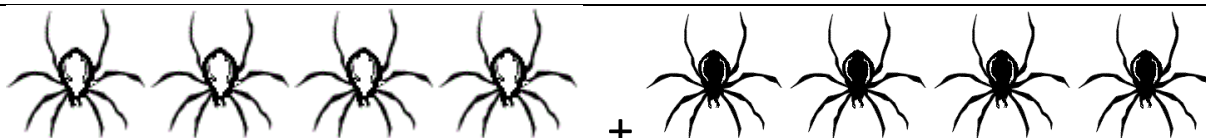
$$\underline{\quad} + \underline{\quad} = \underline{\quad}$$

2)




$$\underline{\quad} + \underline{\quad} = \underline{\quad}$$

3)



$$\underline{\quad} + \underline{\quad} = \underline{\quad}$$

4)



$$\underline{\quad} + \underline{\quad} = \underline{\quad}$$

5)



$$\underline{\quad} + \underline{\quad} = \underline{\quad}$$

6)




$$\underline{\quad} + \underline{\quad} = \underline{\quad}$$

Name _____

Date _____



SUBTRACTION TO 10 SHEET 1



Take 1 from each of these amounts.

$4 - 1 = 3$	$2 - 1 =$	$5 - 1 =$	$3 - 1 =$

Take 2 away from each of these amounts.

$3 - 2 =$	$4 - 2 =$	$5 - 2 =$	$2 - 2 =$

Take 3 away from each of these amounts.

$5 - 3 =$	$6 - 3 =$	$3 - 3 =$	$4 - 3 =$



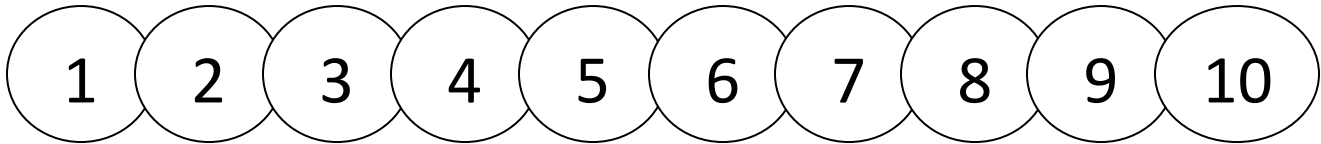
Free Math Sheets, Math Games and Math Help

MATH-SALAMANDERS.COM





SUBTRACTION TO 10 SHEET 2



Cross off the correct number of circles to find the answer.

1) $4 - 2 =$



7) $9 - 2 =$



2) $5 - 1 =$



8) $10 - 1 =$



3) $7 - 1 =$



9) $8 - 3 =$



4) $6 - 2 =$



10) $6 - 3 =$



5) $8 - 2 =$



11) $5 - 4 =$



6) $7 - 5 =$



12) $6 - 6 =$

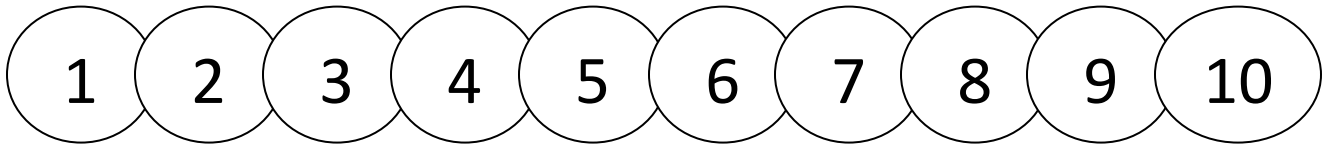


Remember to count carefully!





SUBTRACTION TO 10 SHEET 3



Cross off the correct number of circles to find the answer.

1) $7 - 3 =$



7) $6 - 5 =$



2) $6 - 4 =$



8) $9 - 4 =$



3) $5 - 5 =$



9) $8 - 6 =$




4) $8 - 3 =$



10) $9 - 5 =$



5) $10 - 2 =$




11) $7 - 7 =$



6) $8 - 5 =$



12) $10 - 4 =$



Remember to count carefully!



Name

Date

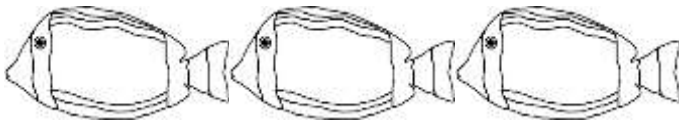


ANIMAL SUBTRACTION TO 5 SHEET 3

Cross out the animals to help you work out these subtractions.



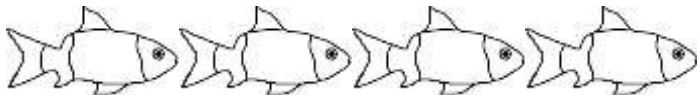
$4 - 1 =$



$3 - 2 =$



$5 - 3 =$



$4 - 2 =$



$5 - 4 =$



$4 - 1 =$



$5 - 0$




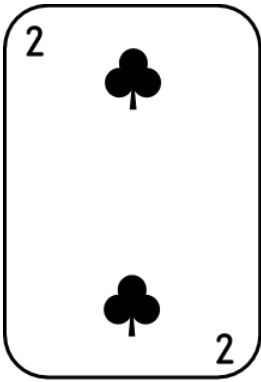
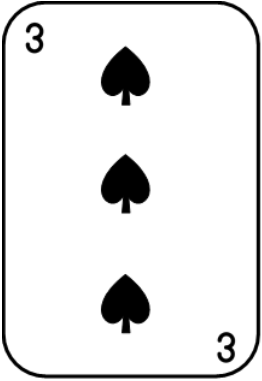



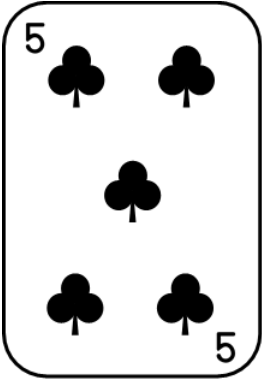





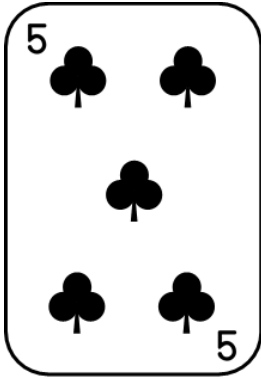

Name

Date



ONE LESS SHEET 1

Circle the card that has **one less** than the first card.

1)				
2)				
3)				
4)				

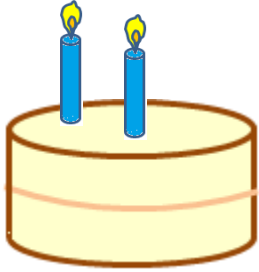











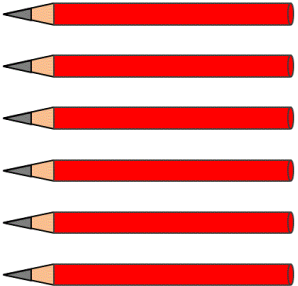


Name

Date



ONE LESS SHEET 3

Circle the picture in each row that is **one less** than the number.

1)	5			
2)	3			
3)	4			
4)	2			
5)	6			

Name

Date



ONE LESS SHEET 4

Circle the picture in each row that is **one less** than the number.

1)	6			
2)	8			
3)	9			
4)	7			
5)	10			