


MATHnificent Week

Mrs. Varela's class

Week of

Jan 23rd– Jan 27th



Full Name: _____

Class and Section: _____

Monday, Jan 23rd is Teacher Planning Day. No School.

HW packet of Jan. 16th-20th is due Tuesday, Jan. 23rd.

HW packet of Jan 23rd-27th is due Monday, Jan. 30th


Chapter 9 Test, Monday 30th

We will complete chapter 9 this week.

This week we will learn how to tell time to the hour and half hour.

Review Words:

- Hour hand
- Half hour
- Half past
- Minutes
- Minute hand



Homework...

Monday	Tuesday	Wednesday	Thursday	Friday
Teacher Planning Day	Lesson 9.6 I-Ready 10 minutes	Lesson 9.7 Lesson 9.8	Lesson 9.9 I-Ready 10 minutes	Measuring inches I-Ready 25 minutes
Parent Signature	Parent Signature	Parent Signature	Parent Signature	Parent Signature

Time to the Hour



COMMON CORE STANDARD MACC.1.MD.2.3


Tell and write time.

Look at where the hour hand points.
Write the time.

1.



2.



3.



4.



5.



6.




PROBLEM SOLVING

REAL WORLD

Solve.

7. Which time is **not** the same? Circle it.



7:00 7 o'clock



Name _____

Lesson 9.7

Time to the Half Hour



COMMON CORE STANDARD MACC.1.MD.2.3

Tell and write time.

Look at where the hour hand points.
Write the time.

1.



2.



3.



4.



5.



6.



PROBLEM SOLVING

REAL WORLD

Solve.

7. Greg rides his bike at half past 4:00. He eats dinner at half past 6:00. He reads a book at half past 8:00.

Look at the clock.

Write what Greg does.



Greg _____

Tell Time to the Hour and Half Hour

COMMON CORE STANDARD MACC.1.MD.2.3

Tell and write time.

Write the time.

1.



2.



3.



4.




5.



6.

**PROBLEM SOLVING****Solve.**

7. Lulu walks her dog at 7 o'clock. Bill walks his dog 30 minutes later. Draw to show what time Bill walks his dog.



Name _____

Lesson 4.4

Practice Time to the Hour and Half Hour



COMMON CORE STANDARD MACC.1.MD.2.3

Tell and write time.

Use the hour hand to write the time.
Draw the minute hand.

1.



2.



3.



4.



5.



6.



PROBLEM SOLVING

REAL WORLD

Solve.

7. Billy played outside for a half hour.

Write how many minutes Billy
played outside.

_____ minutes

Measuring in Inches

Cut out the ruler at the bottom of the page and use it to measure the lengths below!

