

10-1

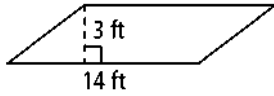
Practice

Form G

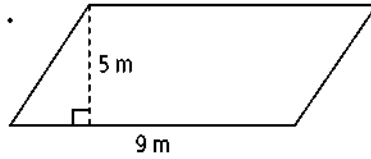
Areas of Parallelograms and Triangles

Find the area of each parallelogram.

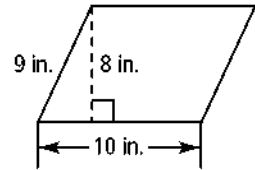
1.



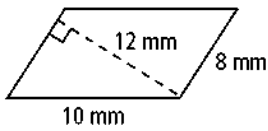
2.



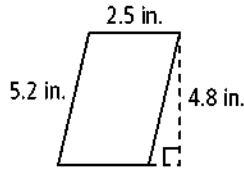
3.



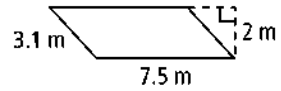
4.



5.

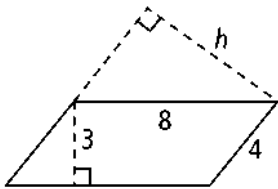


6.

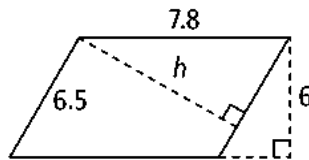


Find the value of h for each parallelogram.

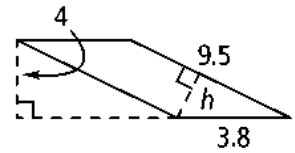
7.



8.

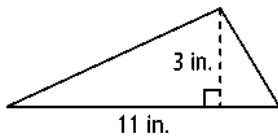


9.

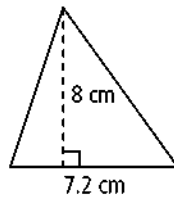


Find the area of each triangle.

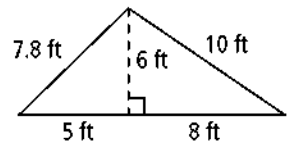
10.



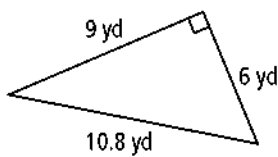
11.



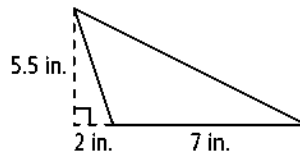
12.



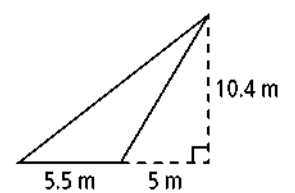
13.



14.



15.



- 16. Algebra** In a parallelogram, a base, b , and its corresponding height, h , are in the ratio of 5 : 3. The area is 135 mm^2 . Find b and h .

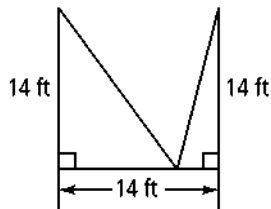
Coordinate Geometry Find the area of a polygon with the given vertices.

21. $A(2, 2)$, $B(5, 2)$, $C(3, -1)$, $D(0, -1)$

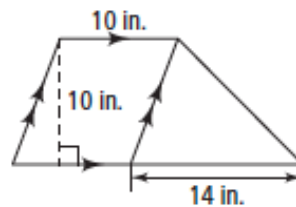
23. $A(5, -3)$, $B(-1, -3)$, $C(-1, 2)$, $D(5, 6)$

Find the area of each figure.

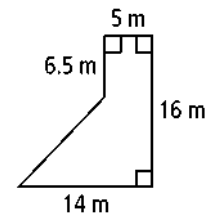
25.



26.



27.



- 29.** A parallelogram has sides 24 m and 5 m. The height corresponding to a 24-m base is 4 m. What is the height corresponding to a 5-m base?