




Homework Log

Week of: February 12th - 16th

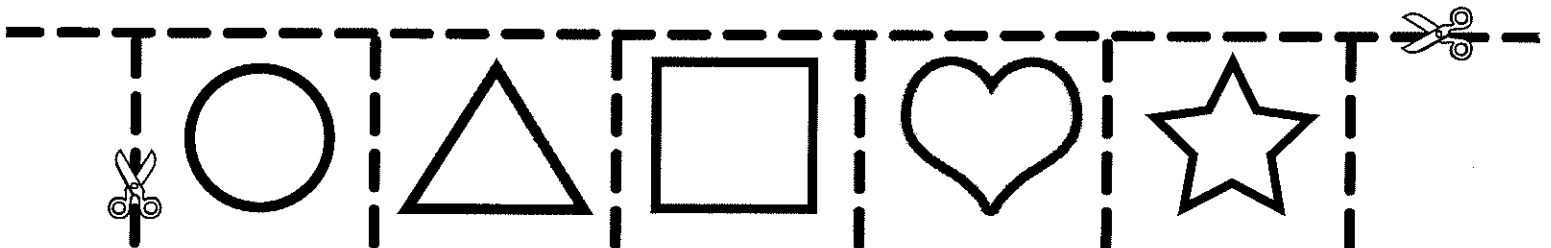
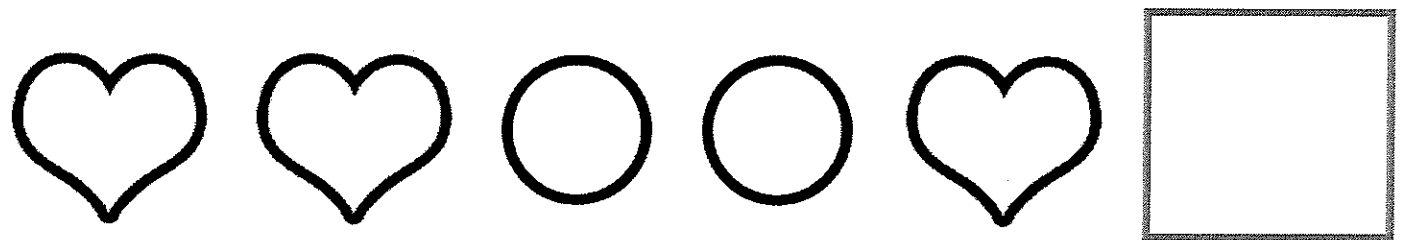

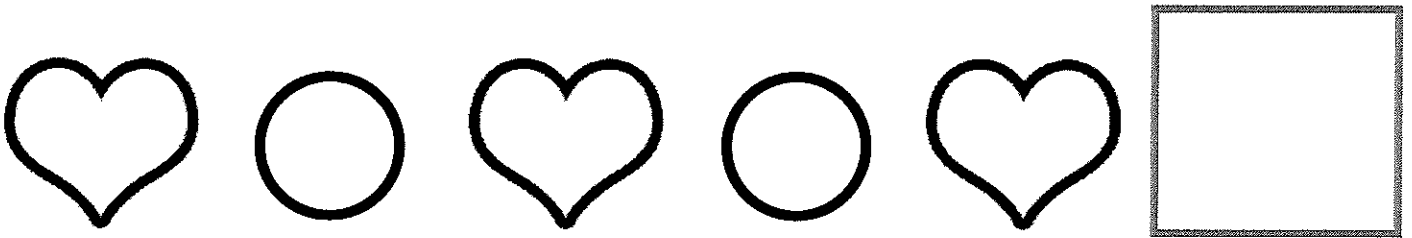


Day	Homework	Reminders
Monday 2/12	Pattern with Hearts	
Tuesday 2/13	Valentine Ten Frame	
Wednesday 2/14	<div>~~~~~Happy Valentine's Day~~~~~ </div> Number 20	Valentine's Day celebration (wear Pink/red)
Thursday 2/15	Comparing numbers	
Friday 2/16		

pattern recognition, shapes

Patterns With Hearts


Cut out the shapes at the bottom of the page. Use them to finish the patterns.




Valentine Ten Frames

Name _____

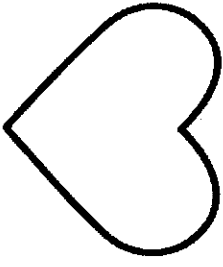
Count the hearts in the ten frames and write the total.




♥	



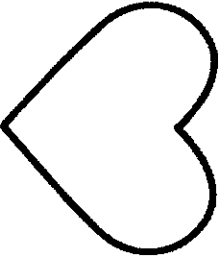
♥	♥
♥	♥
	♥
	♥
	♥




♥	
♥	
♥	




♥	♥
♥	♥
♥	♥
♥	♥
♥	♥



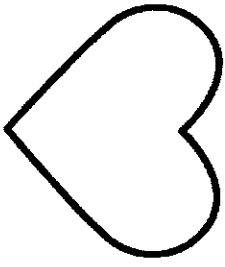
♥	♥
♥	♥
	♥
	♥
	♥



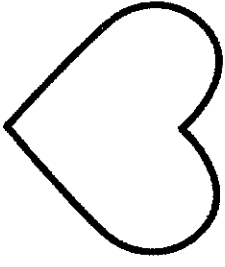
♥	♥
♥	♥
♥	♥
	♥
	♥




♥	
♥	



♥	♥
♥	♥
♥	♥
♥	♥
	♥




	♥
	♥
	♥
	♥



♥	♥
	♥
	♥
	♥
	♥

Name: _____

Let's practice the number 20!



20 20 20

Make it:

Solve it:

$$10 + \underline{\quad} = 20$$

Find it:

20	10	17
18	20	
20	15	12
18	20	

Build it:

Name: _____

Comparing Numbers

Fill in the correct sign (<, >, or =) to compare each set of numbers.

0 ____ 3

5 ____ 2

4 ____ 2

3 ____ 1

5 ____ 5

4 ____ 3

1 ____ 4

0 ____ 0

2 ____ 2

1 ____ 5

