

HOMEWORK 15

due Thursday 1/18, no later than 8am.

This is a 2-week packet.
Do 1 page per day.

Ελληνικά Μαθηματικά

Όνομα: _____

Ημερομηνία: _____



Study the first 2 pages. We will have a quiz on Wednesday, 1/17.

1. Μάθε:

$$\frac{1}{2} = \text{ένα δεύτερο}$$

$$\frac{1}{3} = \text{ένα τρίτο}$$

$$\frac{1}{4} = \text{ένα τέταρτο}$$

$$\frac{1}{5} = \text{ένα πέμπτο}$$

$$\frac{1}{6} = \text{ένα έκτο}$$

$$\frac{1}{7} = \text{ένα έβδομο}$$

$$\frac{1}{8} = \text{ένα όγδοο}$$

$$\frac{1}{9} = \text{ένα ένατο}$$

$$\frac{1}{10} = \text{ένα δέκατο}$$

$$\frac{1}{11} = \text{ένα εντέκατο}$$

$$\frac{1}{12} = \text{ένα δωδέκατο}$$

$$\frac{1}{13} = \text{ένα δέκατο τρίτο}$$

$$\frac{1}{14} = \text{ένα δέκατο τέταρτο}$$

$$\frac{1}{15} = \text{ένα δέκατο πέμπτο}$$

$$\frac{1}{16} = \text{ένα δέκατο έκτο}$$

$$\frac{1}{17} = \text{ένα δέκατο έβδομο}$$

$$\frac{1}{18} = \text{ένα δέκατο όγδοο}$$

$$\frac{1}{19} = \text{ένα δέκατο ένατο}$$

1. Αντιστοιχίσε :



δύο δέκατα

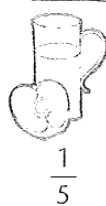
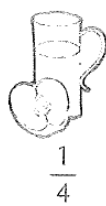
δύο τρίτα

τρία έβδομα

δέκα εικοστά

τρία δέκατα

δέκα δωδέκατα



ένα τέταρτο

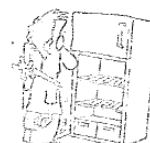
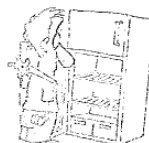
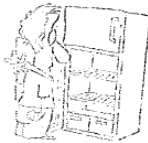
ένα δεύτερο

ένα δέκατο


ένα εικοστό

ένα πέμπτο


ένα όγδοο




2. Χρωμάτισε όσο λέει το κλάσμα. →



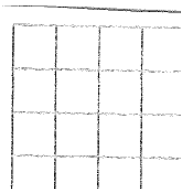
$\frac{1}{2}$



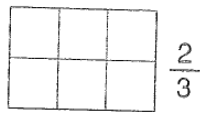
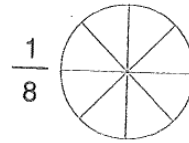


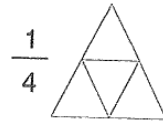
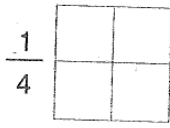
$\frac{1}{4}$



$\frac{1}{4}$



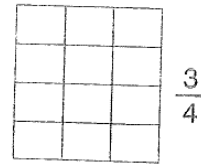
$\frac{3}{8}$



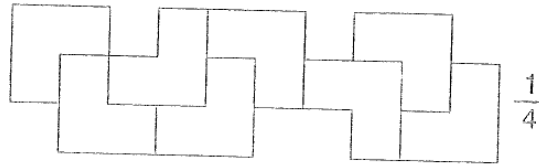
$\frac{2}{3}$



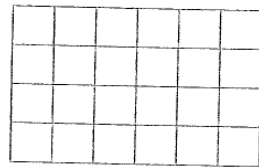
$\frac{3}{5}$



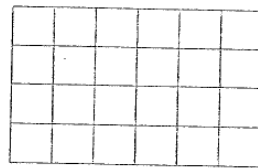
$\frac{3}{4}$



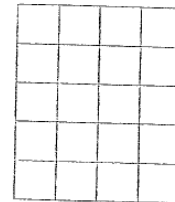
$\frac{1}{4}$



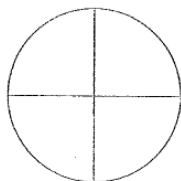
$\frac{2}{4}$



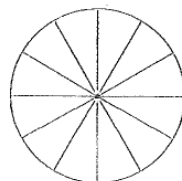
$\frac{2}{6}$



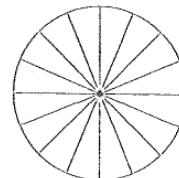
$\frac{3}{5}$



το $\frac{1}{4}$



τα $\frac{2}{12}$



τα $\frac{3}{16}$

3. Αντιστοιχίσε:



•

•

$$\frac{1}{5}$$



•

•

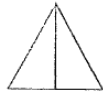
$$\frac{1}{3}$$



•

•

$$\frac{1}{2}$$

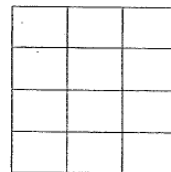
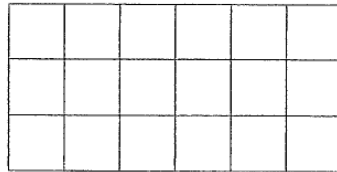


•

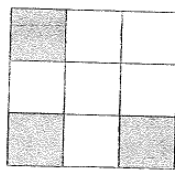
•

$$\frac{1}{4}$$

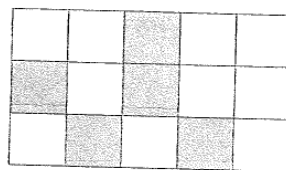
4. Χρωμάτισε το $\frac{1}{6}$ σε κάθε σχήμα.




5. Βρες τα κλάσματα.



—



—



—

6. Συμπλήρωσε όπως στο παράδειγμα

 $\frac{1}{5}$ ένα πέμπτο

 —

 —


 —


 —


 —


 —


7. Γράψε το κλάσμα όπως στο παράδειγμα

$\frac{2}{9}$  →

— 

— 

— 

— 

$\frac{1}{8}$



-



-



-



-



$\frac{2}{7}$



-



-




-




-




8. Χρωμάτισε με κόκκινο όσο λέει το κλάσμα




$$\frac{1}{2}$$




$$\frac{1}{4}$$



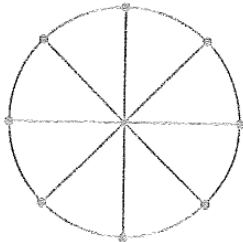
$$\frac{1}{5}$$



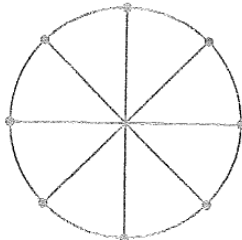
$$\frac{1}{10}$$



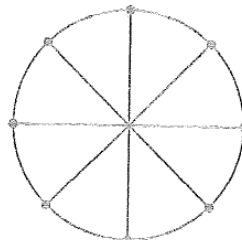
$$\frac{1}{20}$$




$$\frac{1}{2}$$




$$\frac{1}{4}$$




$$\frac{1}{8}$$



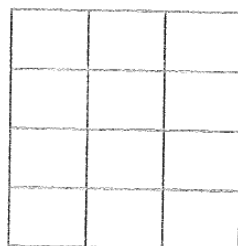
$$\frac{1}{3}$$



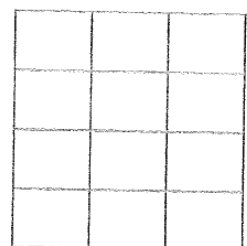
$$\frac{1}{4}$$



$$\frac{1}{2}$$



$$\frac{1}{6}$$




$$\frac{1}{12}$$

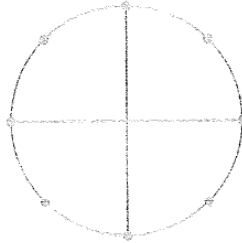
9. Χρωμάτισε με πράσινο όσο λέει το κλάσμα




$$\frac{1}{2}$$



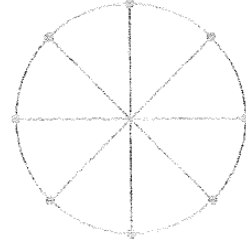
$$\frac{1}{3}$$



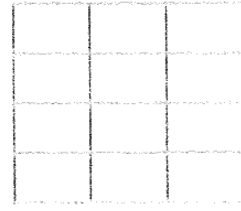
$$\frac{3}{8}$$



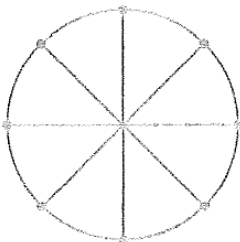
$$\frac{2}{6}$$




$$\frac{1}{2}$$



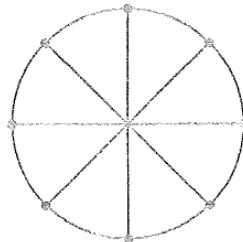
$$\frac{3}{4}$$




$$\frac{3}{8}$$



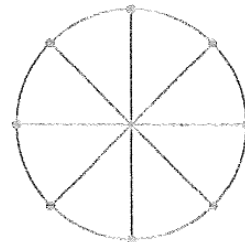
$$\frac{5}{6}$$




$$\frac{2}{4}$$



$$\frac{5}{12}$$



$$\frac{8}{8}$$



$$\frac{2}{2}$$