



# Homework Log

Week of: November 13<sup>th</sup> - 17<sup>th</sup>



Day	Homework	Reminders
Monday 11/13	How many dots are there?	<u>Theme:</u> <u>Pilgrims &amp; Indians</u>
Tuesday 11/14	Fall time counting	
Wednesday 11/15	Fall Patterns	
Thursday 11/16	Number 11 practice	
Friday 11/17	<u>NO School next week!</u>	Already covered: #s 1-11 All 2D shapes Colors AB / ABB Patterns

■ How many dots (●) are there? Write the number in each box.


● ● ●	● ● ● ● ●	●	● ● ● ●	● ●

● ● ● ● ● ● ● ●	● ● ● ● ● ●	● ● ● ● ● ● ● ● ●	● ● ● ● ● ● ● ● ● ●	● ● ● ● ● ● ●

● ● ● ● ●	● ●	● ● ●	●	● ● ● ●

● ● ● ● ● ●	● ● ● ● ● ● ● ● ● ●	● ● ● ● ● ● ● ●	● ● ● ● ● ● ●	● ● ● ● ● ● ● ● ●











Name \_\_\_\_\_

# Fall Time Counting



















Directions: Count the items. Write the number.  
Color the pictures.







Name: \_\_\_\_\_

# Fall Patterns

Use the pictures to complete the patterns

Rainey Cloud Classrooms

			
---	---	--	---

Name \_\_\_\_\_

Date \_\_\_\_\_

# Numbers Practice



Trace and write the number.

1	1	1	1	1	1	1	1	1	1	1	1
---	---	---	---	---	---	---	---	---	---	---	---

--	--	--	--	--	--	--	--	--	--	--	--

Color the number word.

# eleven

Show the number on the ten frame.



Color 11 circles.

○	○	○	○
○	○	○	○
○	○	○	○
○	○	○	○
○	○	○	○