



American Math News

October 23rd – October 26th

Name _____ Class _____ Date _____



Announcements & Reminders

- Friday **October 27th** Teacher Planning day, **No School**,
- Homework is due on Thursday, October 26th in green folder.
- Chapter 5 and 6 **Test on Thursday**, October 26th

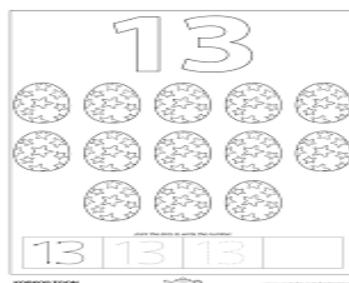

HAVE A GREAT WEEK!

This Week's Homework

Monday	Lesson 6.4 and 6.5 Pg. 1 and Pg. 2
Tuesday	Lesson 7.1 and 7.2 Pg. 3 and Pg. 4
Wednesday	Lesson 7.3 and 7.4 Pg. 5 and Pg. 6
Thursday	Chapter 5 and 6 Test 2

American Math Vocabulary

Eleven
Twelve
Thirteen
Fourteen
Before, After



ame _____

One More and One Less to 10



7



8



5

DIRECTIONS 1. There are 7 pencils in the set. Use the number line to find one less than 7 and one more than 7. Write the numbers. 2-3. Look at the number. Use the number line to find one less than each number and one more than each number. Write the numbers.

Name _____

Compare Two Numbers



DIRECTIONS 1. Draw a line under 8 and 5. Circle the number that is greater. 2. Draw a line under 10 and 7. Circle the number that is greater. 3. Draw a line under 6 and 9. Circle the number that is greater. 4. Draw a line under 4 and 6. Circle the number that is less. 5. Draw a line under 8 and 7. Circle the number that is less. 6. Draw a line under 5 and 3. Circle the number that is less.

Name _____

Model and Count 11 and 12



11



12

DIRECTIONS 1. Draw counters to show 11. 2. Draw counters to show 12.

Name _____

Count and Represent 11 and 12



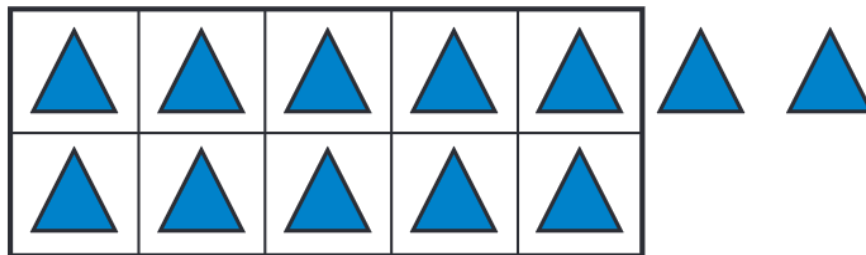
11



Pg. _____

2

12



DIRECTIONS 1–2. Count and tell how many. Practice writing the number.

Name _____

Model and Count 13 and 14



13

2

14

DIRECTIONS 1. Draw counters to show 13. 2. Draw counters to show 14.


Name _____

Count and Represent 13 and 14

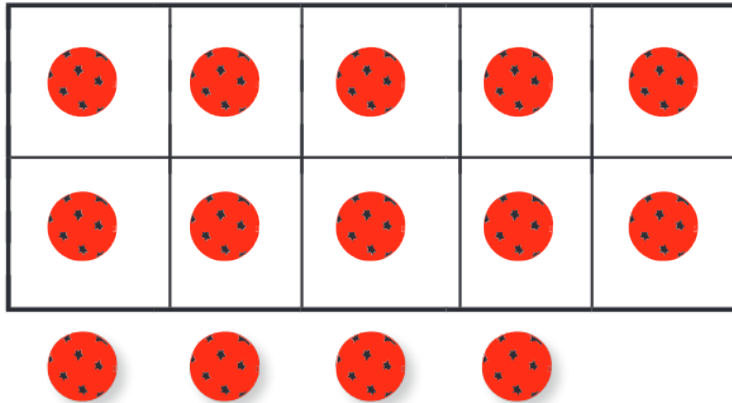
Interactive Examples



13



14



DIRECTIONS 1–2. Count and tell how many. Practice writing the number.