



Name: _____ Class Section: K_____

American Math - Weekly HW 19

Ms. Silvestros

<u>Day:</u>	<u>Assignment:</u>
M	<input type="checkbox"/> Lesson p.529 <input type="checkbox"/> Lesson p. 535-536
T	<input type="checkbox"/> Lesson p.541-542
W	<input type="checkbox"/> Lesson p.543 <input type="checkbox"/> Review p.544
Th	<input type="checkbox"/> Review p.545-546
F	<input type="checkbox"/> Turn in signed HW packet today!



NOTES:HW 19

Week of: 2/6/23

Dear Family,
My class continued
with addition up to
10 practice.



NOTES:

Due: Friday, 2/10/23

*Follow Directions at
the bottom of each
page.

Parent Signature: _____

Name _____

LESSON 13.4
Practice and Homework

Sums Up to 10

Go Online


Interactive Examples







2







DIRECTIONS Listen to the addition problem. Complete the addition equation.

1. Tania has five basketballs. She also has 4 soccer balls. How many balls does she have in all? 2. The team put seven hats on the rack. They also put three gloves on the rack. How many hats and gloves are on the rack?

Name _____

LESSON 13.5

Practice and Homework

Doubles

Go Online

Interactive Examples

1



$$\begin{array}{c} \underline{\quad\quad\quad} \\ - - - - - \\ \underline{\quad\quad\quad} \end{array} + \begin{array}{c} \underline{\quad\quad\quad} \\ - - - - - \\ \underline{\quad\quad\quad} \end{array} = \begin{array}{c} \underline{\quad\quad\quad} \\ - - - - - \\ \underline{\quad\quad\quad} \end{array}$$

2



$$\begin{array}{c} \underline{\quad\quad\quad} \\ - - - - - \\ \underline{\quad\quad\quad} \end{array} + \begin{array}{c} \underline{\quad\quad\quad} \\ - - - - - \\ \underline{\quad\quad\quad} \end{array} = \begin{array}{c} \underline{\quad\quad\quad} \\ - - - - - \\ \underline{\quad\quad\quad} \end{array}$$

3

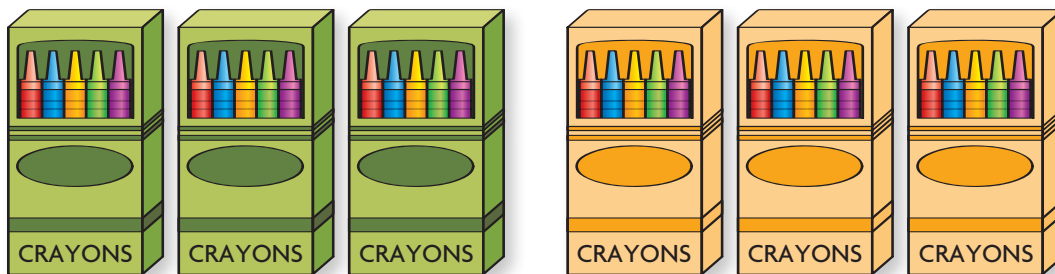


$$\begin{array}{c} \underline{\quad\quad\quad} \\ - - - - - \\ \underline{\quad\quad\quad} \end{array} = \begin{array}{c} \underline{\quad\quad\quad} \\ - - - - - \\ \underline{\quad\quad\quad} \end{array} + \begin{array}{c} \underline{\quad\quad\quad} \\ - - - - - \\ \underline{\quad\quad\quad} \end{array}$$

DIRECTIONS 1–3. Write the number in each group. Add. Write the sum.

Lesson Check

4

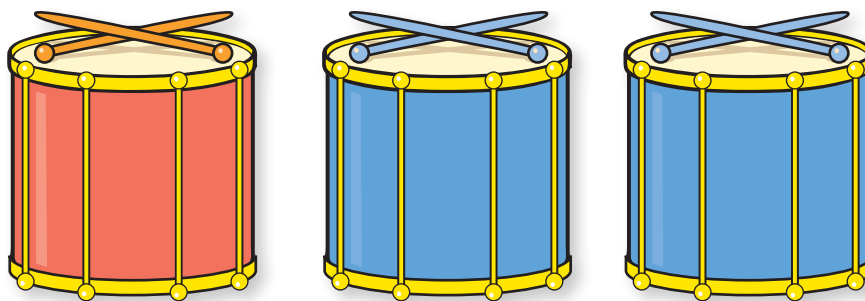


○ $4 + 4 = 8$

○ $3 + 3 = 6$

Spiral Review

5



_____ and _____
_____ = _____

DIRECTIONS 4. Choose the correct answer. What doubles addition fact does the picture show?
5. Show how to combine to make 3.


Name _____

Addition Word Problems

Go Online

Interactive Examples

1



$$\begin{array}{c} \underline{\hspace{2cm}} \\ - - - - - \\ \underline{\hspace{2cm}} \end{array} + \begin{array}{c} \underline{\hspace{2cm}} \\ - - - - - \\ \underline{\hspace{2cm}} \end{array} = \begin{array}{c} \underline{\hspace{2cm}} \\ - - - - - \\ \underline{\hspace{2cm}} \end{array}$$

2




$$\begin{array}{c} \underline{\hspace{2cm}} \\ - - - - - \\ \underline{\hspace{2cm}} \end{array} + \begin{array}{c} \underline{\hspace{2cm}} \\ - - - - - \\ \underline{\hspace{2cm}} \end{array} = \begin{array}{c} \underline{\hspace{2cm}} \\ - - - - - \\ \underline{\hspace{2cm}} \end{array}$$

DIRECTIONS Listen to the addition word problem. How many are in the set to start with? Write the number. Write to complete the addition equation. 1. There are six kites flying in the sky. Then two more kites come flying by. 2. There are seven butterflies. Then three more join them.

Lesson Check

3



☐ 6

☐ 4

4



☐ 8

☐ 5

Spiral Review

5



☐ $5 + 2 = 7$

☐ $3 + 4 = 7$

DIRECTIONS Choose the correct answer. 3. Raul's mom buys 4 red apples. Then she buys 2 more. How many apples does she buy? 4. Alan picks 2 ears of corn. Then he picks 3 more ears of corn. How many ears of corn does Alan pick? 5. What does the picture show?


Chapter Review



$$6 + 1 = \underline{\hspace{2cm}}$$




$$\underline{\hspace{2cm}} = 6 - 1$$



_____	+	_____	=	_____
_____		_____		_____
_____		_____		_____

DIRECTIONS 1–2. Complete the equation. 3. Listen to the addition word problem. Complete the addition equation. There are two adult lions at the zoo. There are 5 lion cubs. How many lions are at the zoo?

4



_____		_____		_____
_____	_____	_____	+	_____
_____	_____	_____		_____

5



_____		_____		_____
_____	_____	_____	+	_____
_____	_____	_____		_____

6





_____		_____		_____
_____	_____	_____	+	_____
_____	_____	_____		_____

DIRECTIONS Listen to the addition word problem. Complete the addition equation. 4. There are 6 ducks next to the pond. Three ducks are swimming in the pond. How many ducks are there? 5. Cuc has seven marbles. Her friend gives her one more. How many marbles does she have? 6. Ten dogs are playing at the dog park. No more dogs come to join them. How many dogs are at the dog park?

Name _____



7









8







9







DIRECTIONS 7–8. Write the number in each group. Add. Write the sum. Trace the symbols. 9. Listen to the addition word problem. Complete the addition equation. Sam picks seven orange flowers and two blue flowers. How many flowers does Sam pick?



<hr/>		<hr/>		<hr/>
<hr/>		<hr/>		<hr/>
<hr/>		<hr/>		<hr/>



<hr/>		<hr/>		<hr/>
<hr/>		<hr/>		<hr/>
<hr/>		<hr/>		<hr/>



<hr/>		<hr/>		<hr/>
<hr/>		<hr/>		<hr/>
<hr/>		<hr/>		<hr/>



DIRECTIONS Listen to the addition word problem. Draw to show how many. Complete the addition equation. 10. Miguel finds six rocks by a pond. Anita finds four rocks. How many rocks do they find together? 11. Hai sees three squirrels. Seven squirrels join them. How many squirrels are there now? 12. Niko has four toy cars. Annabelle has five toy cars. How many toy cars do they have together?