



ONOMA (NAME): _____

Εργασία 19 - Greek Math - (Homework) 19

(2A,2B,2C,2D,2E)



ΚΟΥΦΟΝΗΣΙΑ

Dear Scholars,

This week we will be revising the number's Greek name up to 1000, counting by 1,2,5,10,50,100 forward and backward. We will analyze the value of a number (hundreds, tens, ones) and learn to identify (greater/smaller/equal/half) 3/2/1 digit numbers, using symbols (+ , - , () , = , > , <) and properties in addition - subtraction problems. Mental Maths: (Completion of a **multiple of 10**), (Three digit **plus** a single digit integer).

Dear Parents,

Your children have been practicing similar exercises in class. Along with the example given the beginning of each exercise, they are able to complete the task.

Please, remind them to upload the packet **on Archie**, on **Friday 2/3/2023**. Please, encourage your child to complete the assigned homework.

If you have any questions or concerns, please, contact me through email at: ilias.papadopoulos@archimedean.org.

Thank you,

Mr Elias Papadopoulos





Άσκηση 1: Κάνε τις προσθέσεις, χρησιμοποιώντας την ιδιότητα: $a+(b+c)=(a+b)+c$ όπως στο παράδειγμα:

$$\rightarrow 648+5=648+(2+3)=(648+2)+3=650+3=653$$



$$\rightarrow 979+7=979+(1+6)=(979+1)+6=980+6=986$$



➤ $256+6=$ _____

➤ $378+5=$ _____

➤ $483+8=$ _____

➤ $553+9=$ _____

➤ $679+8=$ _____

➤ $787+6=$ _____

➤ $895+8=$ _____

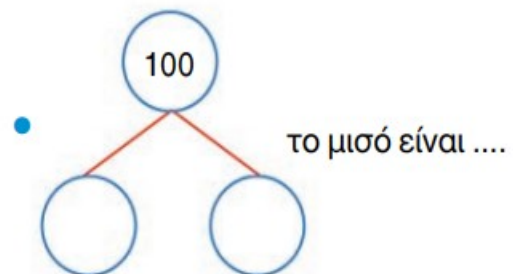
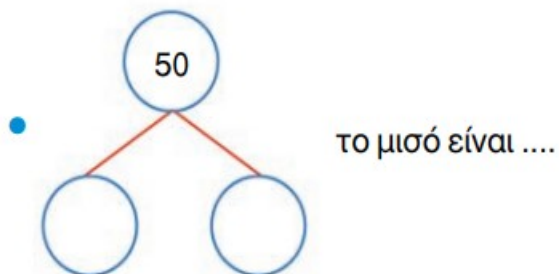
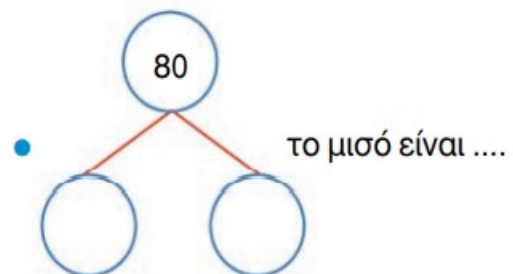
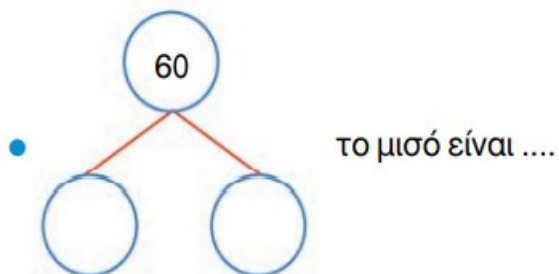
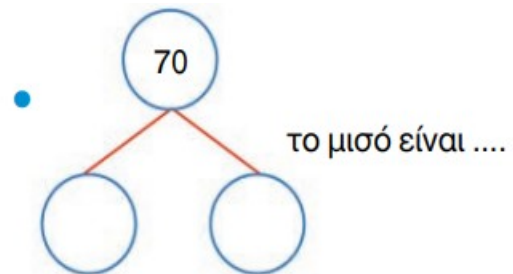
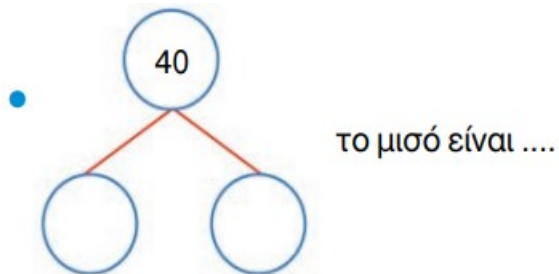
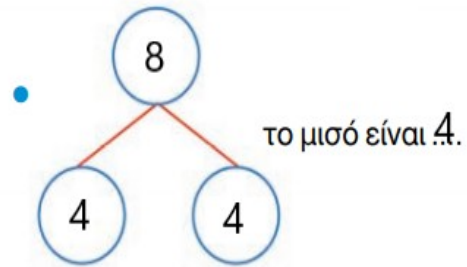
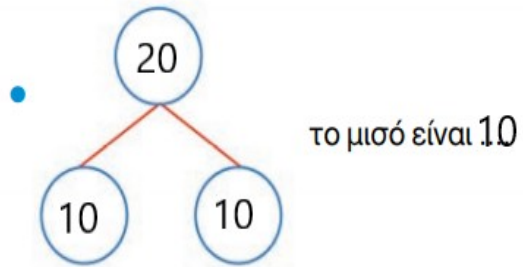
➤ $954+7=$ _____

➤ $143+9=$ _____





Άσκηση 2: Βρες το **μισό** του αριθμού, όπως στο παράδειγμα:





Άσκηση 3: Να βρείτε 5 διαφορετικούς τριψήφιους αριθμούς (3 ψηφία) όπως στο παράδειγμα:

Εκατοντάδα 
Δεκάδα 
Μονάδα 

→ 2 μονάδες / 732 812 482 352 582 

→ 4 δεκάδες / 945 643 541 243 741 

➤ 9 δεκάδες / --- --- --- --- ---

➤ 8 μονάδες / --- --- --- --- ---

➤ 7 δεκάδες / --- --- --- --- ---

➤ 6 μονάδες / --- --- --- --- ---

➤ 5 δεκάδες / --- --- --- --- ---

➤ 4 μονάδες / --- --- --- --- ---

➤ 3 δεκάδες / --- --- --- --- ---

➤ 9 μονάδες / --- --- --- --- ---





Άσκηση 4: Ένωσε τις τελείες μετρώντας ανά ένα (+1) μέχρι το ογδόντα πέντε (85).

