



American Math Homework Week 10/31 - 11/04

Name: _____ Class/Section 2(____)

HMH Chapter 8 Vocabulary Words

- minuend
- subtrahend
- difference
- regroup
- break apart
- columns
- tens
- ones

A Note From Ms. Varela

On your scholar's Archie
account you will find:

- ★ supplemental material for extra practice.
- ★ Instructions to access the HMH interactive Student Book. Great tool to use if your child is absent or needs to review a lesson.

Homework

Please **print** the homework from archie.sis. The homework needs to be completed the assigned day and is reviewed the following day in class. Friday's homework is reviewed the following Monday. If you are not able to complete a homework, please email or send me a note in the agenda.

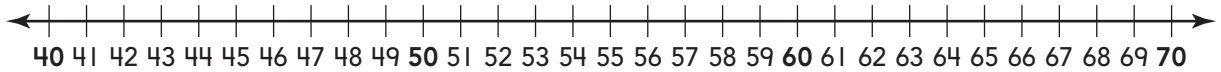
Chapter 7 Test is scheduled for Wednesday, Nov. 2nd.

This week, we will complete Chapter 7 and begin Chapter 8, more 2-Digit Subtraction.

- | | |
|-------------|---|
| ★ Monday | Trick or Treat |
| ★ Tuesday | Chapter 7 Review |
| ★ Wednesday | Lesson 8.1 2-Digit Subtraction |
| ★ Thursday | Lesson 8.2 Practice 2-Digit Subtraction |
| ★ Friday | Lesson 8.3 Rewrite 2-Digit Subtraction |

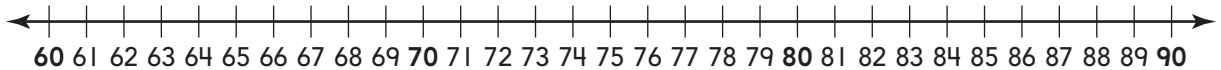
Chapter Review

1. What is the difference?



$$55 - 9 = \underline{\hspace{2cm}}$$

2. Break apart the numbers to subtract.
Write the difference.



$$85 - 18 = \underline{\hspace{2cm}}$$

3. Maria had 47 marbles. She gave 8 to her sister. How many marbles does Maria have now?

Draw a picture or write to explain.

_____ marbles




Break apart the number you are subtracting.
Write the difference.

4. $42 - 8 =$ _____

5. $53 - 16 =$ _____


-
6. There are 34 plants in the greenhouse. 13 of them are vegetable plants, and the rest are houseplants. How many are houseplants?

Draw a picture or write to explain.




_____ houseplants

-
7. Marco has 45 stickers. He gave some stickers to his brother. Now he has 19 stickers left. How many stickers did he give to his brother?



_____ stickers

-
8. Mesoon has 53 points. Pablo has 46 points. How many fewer points does Pablo have than Mesoon?



_____ points

Regroup if you need to. Write the difference.

9.

Tens	Ones
<input type="text"/>	<input type="text"/>
5	5
— 2	8
<hr/>	

10.

Tens	Ones
<input type="text"/>	<input type="text"/>
3	2
— 1	2
<hr/>	

11. Subtract 8 from 36. What is the difference?

— -----

12. There are 24 children at a library. 3 children are checking out books. The rest of the children are reading. How many children are reading?

- ☐ 16 ☐ 27 ☐ 21 ☐ 19

13. Subtract 27 from 43. Draw to show the regrouping. Fill in the bubble next to all the ways to write the difference.

- ☐ 1 ten 6 ones
☐ 66
☐ 6 tens 1 one
☐ 16

14. Subtract 7 from 43.

— -----

15. Draw a quick picture to solve. Write the difference.

Tens	Ones
<input type="text"/>	<input type="text"/>
6	2
— 2	5
<hr/>	

Regroup if you need to.
Write the difference.

1.	2.	3.	4.																																								
<table border="1" style="margin: auto;"> <tr> <th style="width: 50%;">Tens</th> <th style="width: 50%;">Ones</th> </tr> <tr> <td style="height: 30px; border: 1px solid black;"></td> <td style="height: 30px; border: 1px solid black;"></td> </tr> <tr> <td style="text-align: center;">4</td> <td style="text-align: center;">7</td> </tr> <tr> <td style="text-align: center;">- 2</td> <td style="text-align: center;">8</td> </tr> <tr> <td style="border-top: 1px solid black;"></td> <td style="border-top: 1px solid black;"></td> </tr> </table>	Tens	Ones			4	7	- 2	8			<table border="1" style="margin: auto;"> <tr> <th style="width: 50%;">Tens</th> <th style="width: 50%;">Ones</th> </tr> <tr> <td style="height: 30px; border: 1px solid black;"></td> <td style="height: 30px; border: 1px solid black;"></td> </tr> <tr> <td style="text-align: center;">3</td> <td style="text-align: center;">3</td> </tr> <tr> <td style="text-align: center;">- 1</td> <td style="text-align: center;">8</td> </tr> <tr> <td style="border-top: 1px solid black;"></td> <td style="border-top: 1px solid black;"></td> </tr> </table>	Tens	Ones			3	3	- 1	8			<table border="1" style="margin: auto;"> <tr> <th style="width: 50%;">Tens</th> <th style="width: 50%;">Ones</th> </tr> <tr> <td style="height: 30px; border: 1px solid black;"></td> <td style="height: 30px; border: 1px solid black;"></td> </tr> <tr> <td style="text-align: center;">2</td> <td style="text-align: center;">8</td> </tr> <tr> <td style="text-align: center;">- 1</td> <td style="text-align: center;">4</td> </tr> <tr> <td style="border-top: 1px solid black;"></td> <td style="border-top: 1px solid black;"></td> </tr> </table>	Tens	Ones			2	8	- 1	4			<table border="1" style="margin: auto;"> <tr> <th style="width: 50%;">Tens</th> <th style="width: 50%;">Ones</th> </tr> <tr> <td style="height: 30px; border: 1px solid black;"></td> <td style="height: 30px; border: 1px solid black;"></td> </tr> <tr> <td style="text-align: center;">6</td> <td style="text-align: center;">6</td> </tr> <tr> <td style="text-align: center;">- 1</td> <td style="text-align: center;">9</td> </tr> <tr> <td style="border-top: 1px solid black;"></td> <td style="border-top: 1px solid black;"></td> </tr> </table>	Tens	Ones			6	6	- 1	9		
Tens	Ones																																										
4	7																																										
- 2	8																																										
Tens	Ones																																										
3	3																																										
- 1	8																																										
Tens	Ones																																										
2	8																																										
- 1	4																																										
Tens	Ones																																										
6	6																																										
- 1	9																																										
5.	6.	7.	8.																																								
<table border="1" style="margin: auto;"> <tr> <td style="width: 50%; text-align: center;">7</td> <td style="width: 50%; text-align: center;">7</td> </tr> <tr> <td style="text-align: center;">- 2</td> <td style="text-align: center;">6</td> </tr> <tr> <td style="border-top: 1px solid black;"></td> <td style="border-top: 1px solid black;"></td> </tr> </table>	7	7	- 2	6			<table border="1" style="margin: auto;"> <tr> <td style="width: 50%; text-align: center;">5</td> <td style="width: 50%; text-align: center;">8</td> </tr> <tr> <td style="text-align: center;">- 3</td> <td style="text-align: center;">4</td> </tr> <tr> <td style="border-top: 1px solid black;"></td> <td style="border-top: 1px solid black;"></td> </tr> </table>	5	8	- 3	4			<table border="1" style="margin: auto;"> <tr> <td style="width: 50%; text-align: center;">5</td> <td style="width: 50%; text-align: center;">2</td> </tr> <tr> <td style="text-align: center;">- 2</td> <td style="text-align: center;">5</td> </tr> <tr> <td style="border-top: 1px solid black;"></td> <td style="border-top: 1px solid black;"></td> </tr> </table>	5	2	- 2	5			<table border="1" style="margin: auto;"> <tr> <td style="width: 50%; text-align: center;">8</td> <td style="width: 50%; text-align: center;">7</td> </tr> <tr> <td style="text-align: center;">- 4</td> <td style="text-align: center;">9</td> </tr> <tr> <td style="border-top: 1px solid black;"></td> <td style="border-top: 1px solid black;"></td> </tr> </table>	8	7	- 4	9																		
7	7																																										
- 2	6																																										
5	8																																										
- 3	4																																										
5	2																																										
- 2	5																																										
8	7																																										
- 4	9																																										

There were 34 chickens in the barn.
Then 16 chickens went outside into the
yard, how many chickens were still
in the barn?

Circle the number from the box to make
the sentence true.

There were

8
18
28

 chickens still in the barn.

Spencer wrote 5 fewer stories
than Katie. Spencer wrote
18 stories. How many
stories did Katie write?

Write the difference.

1.

$$\begin{array}{r} 50 \\ -18 \\ \hline \end{array}$$

2.

$$\begin{array}{r} 43 \\ -17 \\ \hline \end{array}$$

3.

$$\begin{array}{r} 75 \\ -18 \\ \hline \end{array}$$

Mars drew 28 more stars on his art project than Sarah. Mars drew 76 stars. How many stars did Sarah draw on her art project?

_____ stars

Some oranges were in a truck going to the store. The driver dropped off 37 oranges at the store. Now there are 23 oranges left in the truck. How many oranges were in the truck at the start?

_____ oranges

There were 51 pieces of art at a museum. Thirty-nine of them were paintings, and the rest were sculptures. How many pieces of art were sculptures?

_____ sculptures

Marissa had 51 toy dinosaurs. She gave 14 toy dinosaurs to her brother. How many toy dinosaurs does she have now?

_____ toy dinosaurs

Rewrite the subtraction problem.
Then find the difference.

1. $35 - 19$

$$\begin{array}{r} \\ \hline \end{array}$$

2. $47 - 23$

$$\begin{array}{r} \\ \hline \end{array}$$

3. $55 - 28$

$$\begin{array}{r} \\ \hline \end{array}$$

-
4. Abraham went to the toy store. He saw 23 wooden trains and 41 plastic trains. How many more plastic trains than wooden trains did he see?

_____ more plastic trains

Xiao drew 23 pictures last year. Beth drew 14 pictures. How many more pictures did Xiao draw than Beth?

Fill in the bubble next to all the ways to show the problem.

☐
$$\begin{array}{r} 23 \\ - 14 \\ \hline \end{array}$$

☐
$$\begin{array}{r} 23 \\ + 14 \\ \hline \end{array}$$

☐ $23 - 14$

☐ $23 + 14$

_____ more pictures