



1st Grade Mathematics
Ms. Kordy
Week of September 19th to September 23rd

Dear Parents,
Scholars will be practicing how to count forward and backwards within a given number to 120. Also, they will skip count by 2s, 5s, and 10s up to 120.

Name: _____

Reminders:

1. I will be checking the homework packet every Friday, if there is a homework packet assignment.
2. Please place the homework packet inside the **Math Green Folder**, not other folders. Please make sure to take out the old homework packets from the **Green Folder** and keep them at home every week.
3. Please **don't write** on the checklist inside the **Green Folder**. The checklist will be completed by me every Friday if there is a homework packet assignment.
4. Please ask your scholar to write **only 2 times** the vocabulary of the week.
5. Please make sure to print out the homework packet **every Monday** and ask your scholar to keep it in the **Green Folder** at all times.
6. I will be giving an **assessment this Wednesday September 21st**.
7. Scholars will be using HMH, IXL, SeeSaw, and Sumdog for American Math Class.

Vocabulary:

Less
Few
Least
More
Greatest

Monday: Page 1 and Page 2
Tuesday: Page 3 and Page 4
Wednesday: Page 5 and Page 6
Thursday: Page 7 Just for vocabulary
Friday: Due Date

IXL Skills and Seesaw


None

Name _____

On Your Own

Skip count. Write how many.


2.



_____ balls

Skip count. Count the points on each star by fives. Write how many.

3.



_____ points

Use skip counting by fives to solve.
Write or draw to explain.

4. There are five arms on each starfish. How many arms are on 12 starfish?

_____ arms

5. Sofia saves 5 cents a day. How many cents does she have in one week?

_____ cents

Problem Solving • Applications

Choose the correct answer.



6. Mrs. Mick's farm has 10 ponds.

Each pond has 5 fish.

How many fish are on Mrs. Mick's farm?

Skip count by fives.

- ☐ 20 ☐ 50 ☐ 100

7. Count by fives. Which numbers are missing?

55, _____, 65, 70, _____

- ☐ 60 and 75 ☐ 60 and 70 ☐ 56 and 71

8. Oni collects baseball cards. Oni groups them in fives. Oni has 15 stacks of cards. How many cards does Oni have?

- ☐ 100 ☐ 75 ☐ 25

9. Which number comes after 95 when skip counting by fives?

- ☐ 96 ☐ 105 ☐ 100



TAKE HOME ACTIVITY • Have your child use buttons or beans to make groups of five. Then have them count by fives to tell how many objects.

Lesson Check

Choose the correct answer.

4. There are 16 twins in the town.
Skip count. How many pairs
of twins are in the town?



☐ 2

☐ 6

☐ 8

5. Carla has 5 flower pots. She plants 2 seeds
in each pot. Then she plants 2 more seeds
in each pot. Skip count by twos. How many
seeds did Carla plant?

☐ 9

☐ 10

☐ 20

Spiral Review

6. Which number comes after 58 when counting
forward by ones?

☐ 50

☐ 59

☐ 60

7. Georgia has 64 shells. She gives 5 shells
to her sister. Count backward to see
how many shells Georgia has now.

64, _____, _____, _____, _____, _____

Problem Solving • Applications

Solve.

6. There are 14 dancers on the dance floor.
Skip count. How many groups of 2 are
on the dance floor?

☐ 4 ☐ 7 ☐ 12

7. Alyssa is placing socks in pairs.
Skip count by twos.
Which numbers come next?

8, 10, _____, _____, _____

- ☐ 20, 30, 40
☐ 12, 14, 16
☐ 11, 12, 13



8. Omar gives 2 stickers to each of
his cousins. Omar has 6 cousins.
How many stickers did Omar give
to his cousins?

9. Which number comes after
14 when skip counting by twos?

☐ 13 ☐ 16 ☐ 15



TAKE HOME ACTIVITY • Give your child a handful of pennies. Have
the child group the pennies in pairs and then count them by twos.

Name _____

On Your Own


Skip count. Write how many.

3.



_____ pennies

4.



_____ shells

Use skip counting by twos to solve.
Write or draw to explain.

5. There are two colors on each paint tray. How many colors would be on 5 trays?

_____ colors

6. There are 8 children in the park. Each child has a bicycle. There are two tires on each bicycle. How many tires are there?

_____ tires

Name: _____

Date: _____

10 less	Number	10 more
	50	
	90	
	12	
	35	
	26	
	47	
	37	
	18	
	21	
	60	
	45	
	62	
	39	
	34	
	73	

