


Week of
April 6th – 10th
Due April 10th

MATHnificent Week

1st Grade Math



As mentioned in our zoom meeting last Friday, you do not need to print nor upload this homework cover page. If you are not able to print the classwork, please have paper available for your scholar to complete the class assignments. The homework and classwork should be uploaded to your scholars' Archimedean account by Friday end of the day.

I-Ready is back as regularly scheduled. Please complete 45 minutes of I-ready Math per week. Scholars may use I-ready Learning Games as daily/weekend enrichment or fun mathematics practice during free time. At this time, scholars can only be playing the Hungry Guppy.

If you experience any issues using your Archie acct., please email: support@archimedean.org

Thank you for your support and cooperation ;) We have a great week ahead!



Monday	Tuesday	Wednesday	Thursday	Friday
Lesson 3 Classwork	Lesson 3 Homework Sumdog April 7 th practice	Practice in Class	Checkpoint Homework	Teacher Planning Day

Use Place Value to Compare Numbers

Essential Question: How can you use place value to compare two numbers?

Model and Draw

Use these symbols to compare numbers.

> is greater than
< is less than
= is equal to

45 46

45 < 46
45 is less than 46.

Compare 134 and 125.


First compare hundreds.

One hundred is equal to one hundred.

$$100 = 100$$

If the hundreds are equal, compare the tens. 30 is greater than 20.

$$134 > 125$$



I want to eat the greater number.



Share and Show

Write the numbers and compare. Write >, <, or =.



2. 168

Compare the numbers using >, <, or =.

3. 187 < 168 4. 165 < 159 5. 127 < 141

Math Talk Compare 123 and 177. Did you have to compare all the digits? Why or why not?

Getting Ready for Grade 2

five GR5

On Your Own

Write the numbers. Compare. Write >, <, or =.



— ○ — — ○ —

Compare the numbers using >, <, or =.

- | | | |
|---------------|---------------|---------------|
| 8. 143 ○ 143 | 9. 162 ○ 157 | 10. 185 ○ 188 |
| 11. 124 ○ 129 | 12. 189 ○ 195 | 13. 135 ○ 135 |
| 14. 173 ○ 164 | 15. 123 ○ 117 | 16. 118 ○ 131 |
| 17. 155 ○ 145 | 18. 181 ○ 181 | 19. 192 ○ 179 |
| 20. 122 ○ 129 | 21. 166 ○ 177 | 22. 154 ○ 154 |

Problem Solving

Real World

23. Antonio is thinking of a number between 100 and 199.

It has 1 hundred, 3 tens, and 6 ones. Kim is thinking of a number between 100 and 199.

It has 1 hundred, 6 tens, and 3 ones. Who is thinking of a greater number?

_____ is thinking of a greater number.

Draw or write to explain.

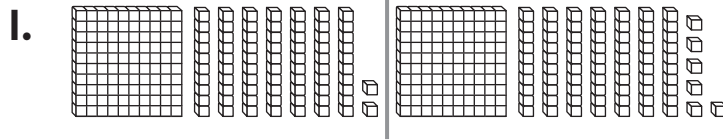


TAKE HOME ACTIVITY • Choose two numbers between 100 and 199 and have your child explain which number is greater.

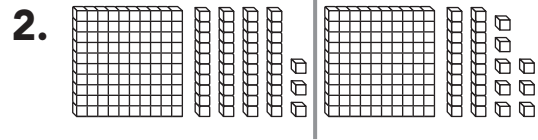
GR6 six

Use Place Value to Compare Numbers

Write the numbers. Compare. Write $>$, $<$, or $=$.



$$\underline{172} \quad \bigcirc \quad \underline{176}$$



$$\underline{\quad} \quad \bigcirc \quad \underline{\quad}$$

Compare the numbers using $>$, $<$, or $=$.

3. $162 \bigcirc 162$

4. $154 \bigcirc 148$

5. $195 \bigcirc 199$

6. $133 \bigcirc 137$

7. $129 \bigcirc 126$

8. $141 \bigcirc 141$

9. $119 \bigcirc 125$

10. $173 \bigcirc 173$

11. $187 \bigcirc 192$

12. $153 \bigcirc 153$

13. $191 \bigcirc 178$

14. $144 \bigcirc 153$

Problem Solving



Solve.

15. Josh is thinking of a number between 100 and 199. It has 1 hundred, 4 tens, and 9 ones. Pia is thinking of a number between 100 and 199. It has 1 hundred, 8 tens, and 2 ones. Who is thinking of the greater number?

Draw or write to explain.

_____ is thinking of a greater number.

Name _____

✓ Checkpoint

Concepts and Skills


Write how many tens and ones.
Write the number in two ways.



_____ tens and _____ ones
_____ + _____ = _____



_____ tens and _____ one
_____ + _____ = _____



Use your MathBoard and
Draw to complete the quick picture.
Write how many hundreds, tens, and ones.

3. 154

hundreds	tens	ones

4. 128

hundreds	tens	ones

Getting Ready for Grade 2

seven **GR7**

Write the numbers and compare. Write $>$, $<$, or $=$.



_____ \bigcirc _____

Compare the numbers using $>$, $<$, or $=$.

7. 175 \bigcirc 175

8. 163 \bigcirc 173

9. 189 \bigcirc 188

10. 142 \bigcirc 158

11. 157 \bigcirc 157

12. 185 \bigcirc 180

13. Which comparison is correct?

- ☐ $132 > 131$
- ☐ $131 = 132$
- ☐ $131 > 132$

GR8 eight