

Name \_\_\_\_\_

Date: \_\_\_\_\_ Section: \_\_\_\_\_

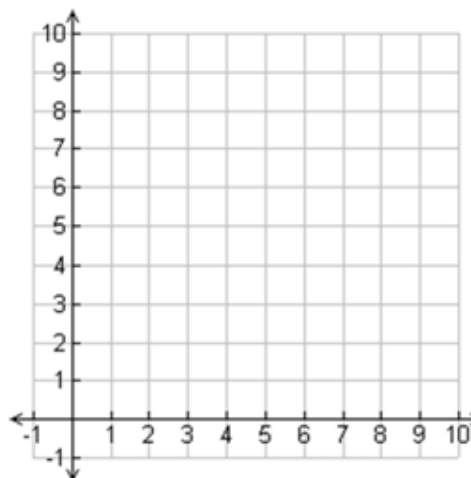
## Review Homework (Homework 34.5)

1. Use this table to make a graph.

x	y
0	2
2	4
4	6
6	8
8	10

Write a function for this problem.

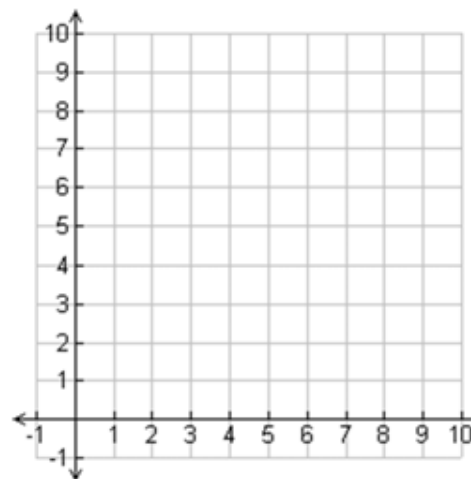
\_\_\_\_\_



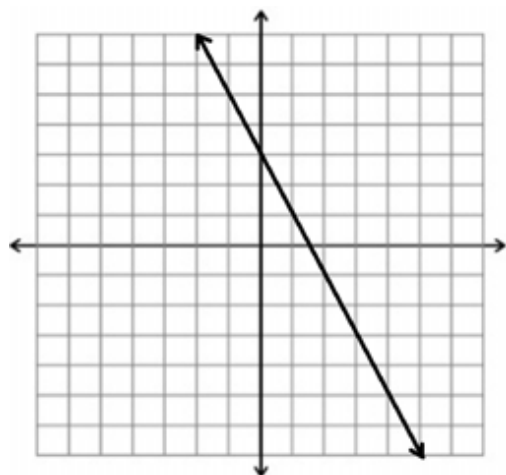
2. Use the equation below to make a table. Use this information to create a graph.

$$y = 2x + 1$$

x	y



3. Use the graph below to create a table.



x	y

Write a function for this problem.

\_\_\_\_\_