


HOMEWORK 16 due on Friday 1/25



3η Τάξη

Ελληνικά Μαθηματικά

Όνομα: _____

Ημερομηνία: _____



-
1. Page 1&2 due on Tuesday 1/15.
 2. Page 3 due on Wednesday 1/16.
 3. Page 4 due on Thursday 1/17.
- test - Thursday 1/17**
4. Page 5 due on Tuesday 1/22.
 5. Page 6 due on Wednesday 1/23.
 7. Page 7 due on Thursday 1/24.
 8. Page 8 due on Friday 1/25.

1. Αντιστοιχίσε:



δύο δέκατα

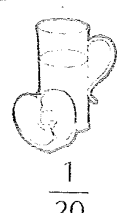
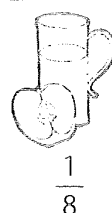
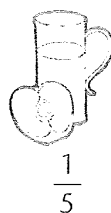

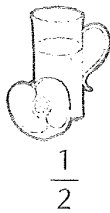
δύο τρίτα

τρία έβδομα

δέκα εικοστά

τρία δέκατα

δέκα δωδέκατα



ένα τέταρτο

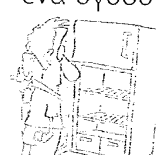
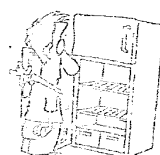

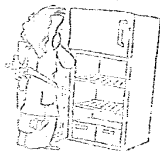
ένα δεύτερο

ένα δέκατο


ένα εικοστό

ένα πέμπτο


ένα όγδοο




2. Χρωμάτισε όσο λέει το κλάσμα. →



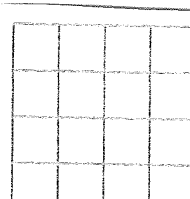
$\frac{1}{2}$



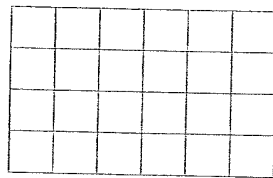
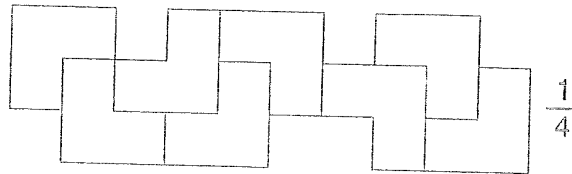
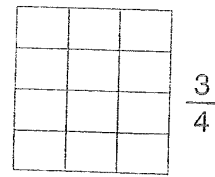
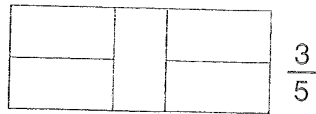
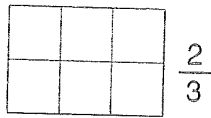
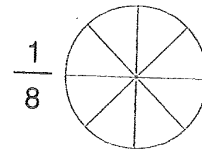
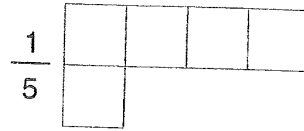
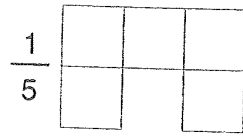
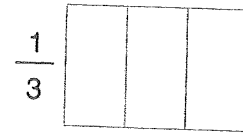
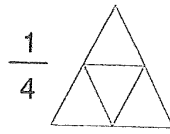
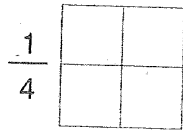
$\frac{1}{4}$



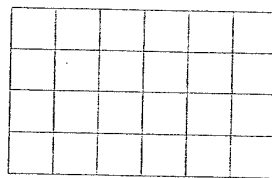
$\frac{1}{4}$



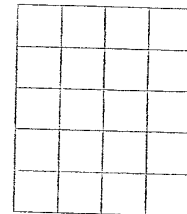
$\frac{3}{8}$



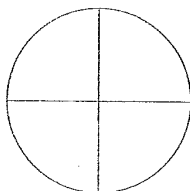
$\frac{2}{4}$



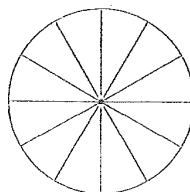
$\frac{2}{6}$



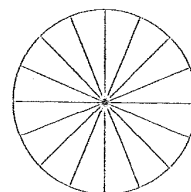
$\frac{3}{5}$



$\text{το } \frac{1}{4}$




$\text{τα } \frac{2}{12}$



$\text{τα } \frac{3}{16}$

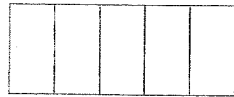
3. Αντιστοιχίσε:



•

•

$$\frac{1}{5}$$



•

•

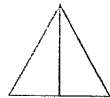
$$\frac{1}{3}$$



•

•

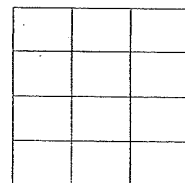
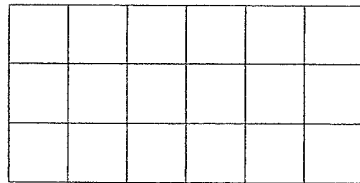
$$\frac{1}{2}$$



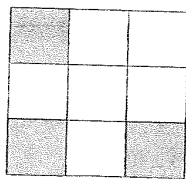
•

•

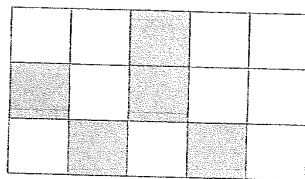
$$\frac{1}{4}$$

4. Χρωμάτισε το $\frac{1}{6}$ σε κάθε σχήμα.

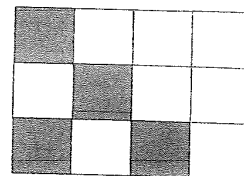
5. Βρες τα κλάσματα.



—



—








—


6. Συμπλήρωσε όπως στο παράδειγμα

	$\frac{1}{5}$ ένα πέμπτο
	—
	—
	—
	—
	—
	—


7. Γράψε το κλάσμα όπως στο παράδειγμα

$\frac{2}{9}$		→
—		
—		
—		
—		

$\frac{1}{8}$




-



-



-



-




$\frac{2}{7}$



-



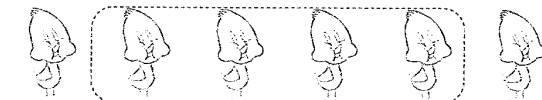
-




-




-




8. Χρωμάτισε με κόκκινο όσο λέει το κλάσμα




$\frac{1}{2}$




$\frac{1}{4}$



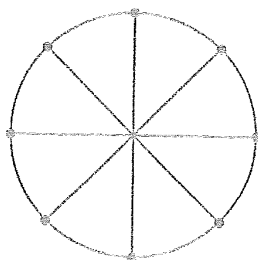
$\frac{1}{5}$



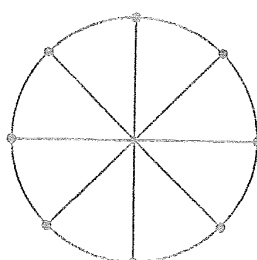
$\frac{1}{10}$



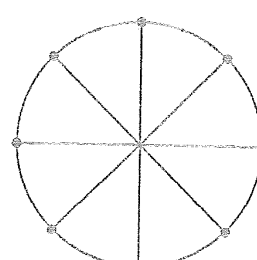
$\frac{1}{20}$




$\frac{1}{2}$




$\frac{1}{4}$



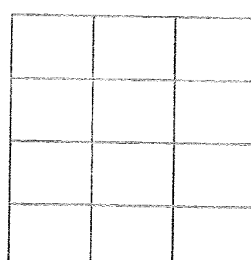
$\frac{1}{8}$



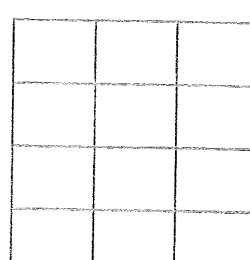
$\frac{1}{3}$



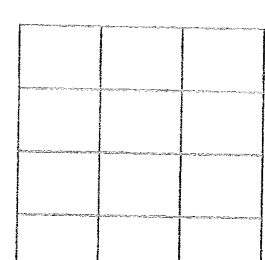
$\frac{1}{4}$



$\frac{1}{2}$

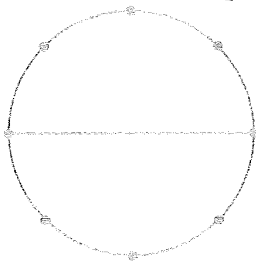


$\frac{1}{6}$




$\frac{1}{12}$

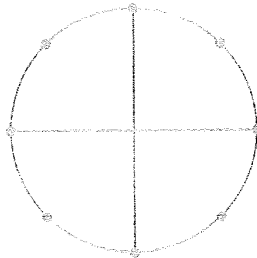
9. Χρωμάτισε με πράσινο όσο λέει το κλάσμα




$$\frac{1}{2}$$



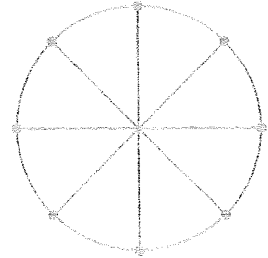
$$\frac{1}{3}$$




$$\frac{3}{8}$$



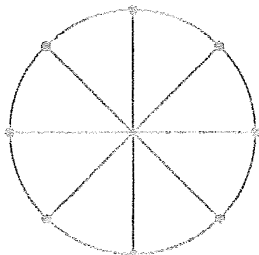
$$\frac{2}{6}$$




$$\frac{1}{2}$$



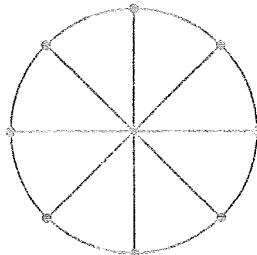
$$\frac{3}{4}$$



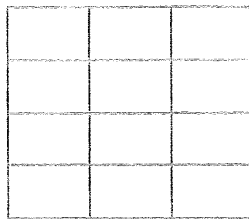
$$\frac{3}{8}$$



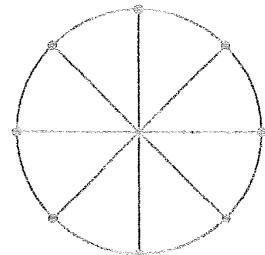
$$\frac{5}{6}$$




$$\frac{2}{4}$$



$$\frac{5}{12}$$

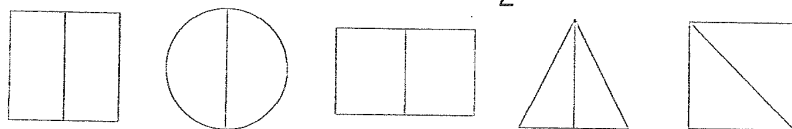
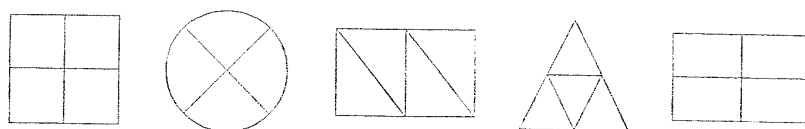
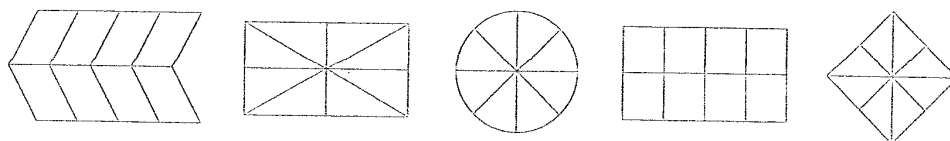
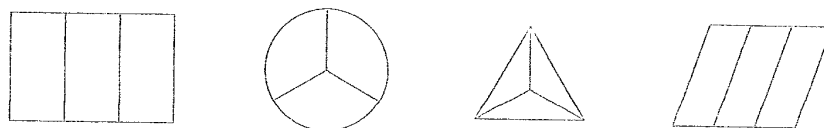
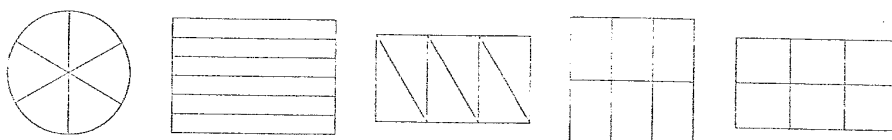


$$\frac{8}{8}$$

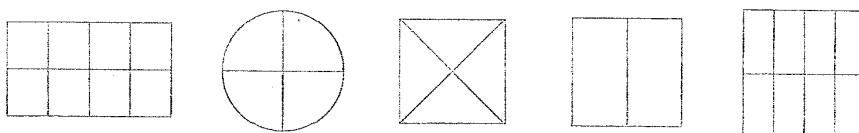


$$\frac{2}{2}$$

10. Χρωμάτισε:

α) Με κόκκινο χρωματιστό μολύβι το $\frac{1}{2}$ κάθε σχήματος.β) Με πράσινο χρωματιστό μολύβι το $\frac{1}{4}$ κάθε σχήματος.γ) Με κίτρινο χρωματιστό μολύβι το $\frac{1}{8}$ κάθε σχήματος.δ.) Με μπλε χρωματιστό μολύβι το $\frac{1}{3}$ κάθε σχήματος.ε) Με πράσινο χρωματιστό μολύβι το $\frac{1}{6}$ κάθε σχήματος.

11. Γράψε τα κλάσματα:



—

—

—

—

—