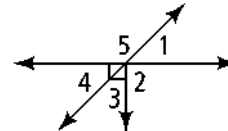


1-5 Practice

Form G

Use the diagram at the right. Is each statement true? Explain.

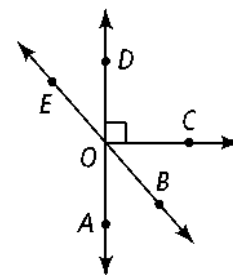
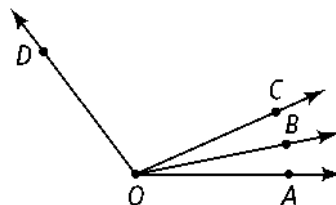
1. $\angle 2$ and $\angle 5$ are adjacent angles.
2. $\angle 1$ and $\angle 4$ are vertical angles.
3. $\angle 4$ and $\angle 5$ are complementary.



Name an angle or angles in the diagram described by each of the following.

4. complementary to $\angle BOC$
5. supplementary to $\angle DOB$
6. adjacent and supplementary to $\angle AOC$

Use the diagram below for Exercises 7 and 8. Solve for x . Find the angle measures.



7. $m\angle AOB = 4x - 1$; $m\angle BOC = 2x + 15$; $m\angle AOC = 8x + 8$
8. $m\angle COD = 8x + 13$; $m\angle BOC = 3x - 10$; $m\angle BOD = 12x - 6$
9. $\angle ABC$ and $\angle EBF$ are a pair of vertical angles; $m\angle ABC = 3x + 8$ and $m\angle EBF = 2x + 48$. What are $m\angle ABC$ and $m\angle EBF$?
10. $\angle JKL$ and $\angle MNP$ are complementary; $m\angle JKL = 2x - 3$ and $m\angle MNP = 5x + 2$. What are $m\angle JKL$ and $m\angle MNP$?

For Exercises 11–14, can you make each conclusion from the information in the diagram? Explain.

11. $\angle 3 \cong \angle 4$
12. $\angle 2 \cong \angle 4$
13. $m\angle 1 + m\angle 5 = m\angle 3$
14. $m\angle 3 = 90$
15. \overline{KM} bisects $\angle JKL$. If $m\angle JKM = 86$, what is $m\angle JKL$?
16. \overline{SV} bisects $\angle RST$. If $m\angle RST = 62$, what is $m\angle RSV$?

1-5 Practice (continued) Form G

\overrightarrow{QS} bisects $\angle PQR$. Solve for x and find $m\angle PQR$.

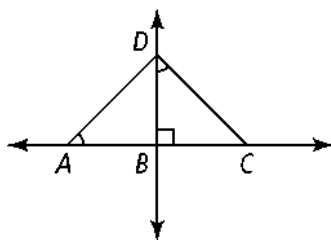
17. $m\angle PQS = 3x$; $m\angle SQR = 5x - 20$

18. $m\angle PQS = 2x + 1$; $m\angle RQS = 4x - 15$

19. $m\angle PQR = 3x - 12$; $m\angle PQS = 30$

20. $m\angle PQS = 2x + 10$; $m\angle SQR = 5x - 17$

For Exercises 21–24, can you make each conclusion from the information in the diagram below? Explain.



21. $\angle DAB$ and $\angle CDB$ are congruent.

22. $\angle ADB$ and $\angle CDB$ are complementary.

23. $\angle ADB$ and $\angle CDB$ are congruent.

24. $\angle ADB$ and $\angle BCD$ are congruent.

25. **Algebra** $\angle MLN$ and $\angle JLK$ are complementary, $m\angle MLN = 7x - 1$, and $m\angle JLK = 4x + 3$.

a. Solve for x .

b. Find $m\angle MLN$ and $m\angle JKL$.

c. Show how you can check your answer.